



Adı Soyadı :

Numarası :

Konu: Sayı Örüntüleri Etkinliği 3

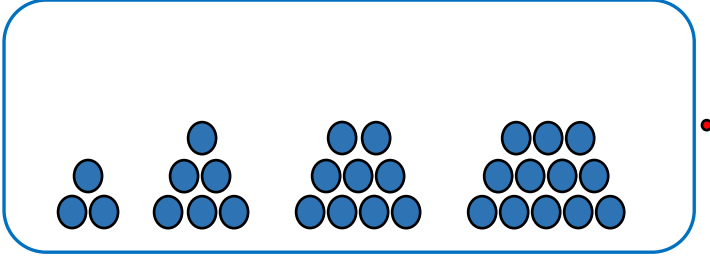
Aşağıdaki sayı örüntülerinin kurallarını bulup kutulara yazalım.

- 27, 36, 45, 54, 63, 72, 81 **Kural:**
- 52, 57, 62, 67, 72, 77, 82 **Kural:**
- 11, 12, 14, 17, 21, 26, 32 **Kural:**
- 83, 72, 61, 50, 39, 28, 17 **Kural:**
- 1, 4, 7, 10, 13, 16, 19, 22 **Kural:**
- 150, 140, 120, 110, 90, 80 **Kural:**
- 51, 44, 37, 30, 23, 16, 9 **Kural:**

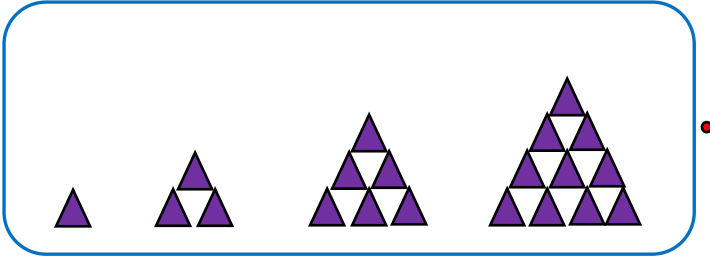
Aşağıdaki sayı örüntülerinin kuralını bulup örüntüleri üç adım genişletelim.




Aşağıdaki modelleri uygun sayı örüntüleri ile eşleştirelim.



- 15
- 11
- 7
- 3




- 4
- 10
- 16
- 22



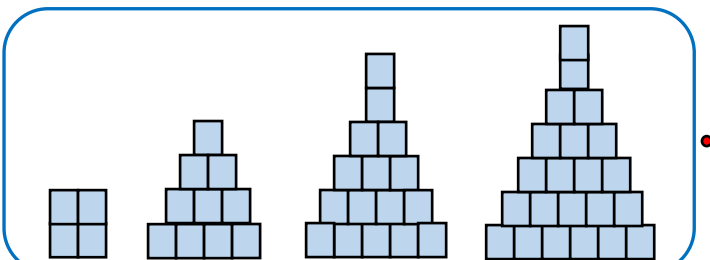
- 2
- 4
- 8
- 16



- 1
- 3
- 6
- 10



- 3
- 6
- 9
- 12



- 20
- 15
- 10
- 5