

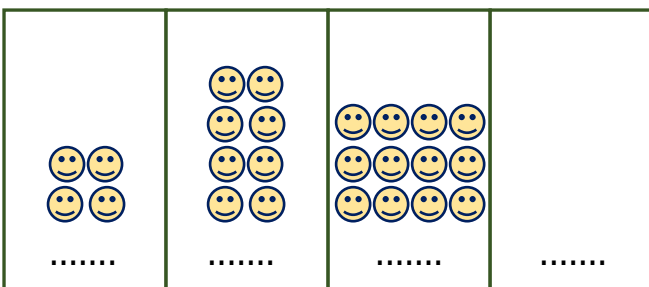
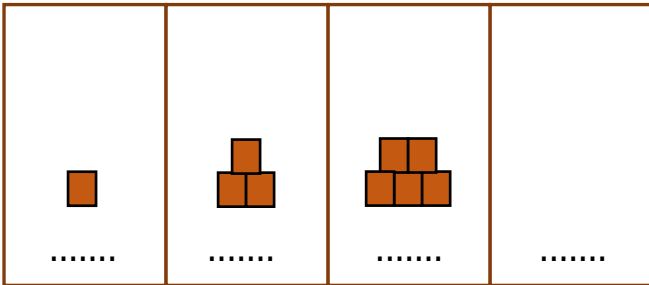
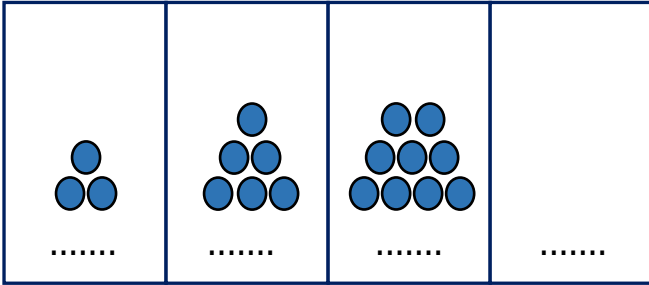
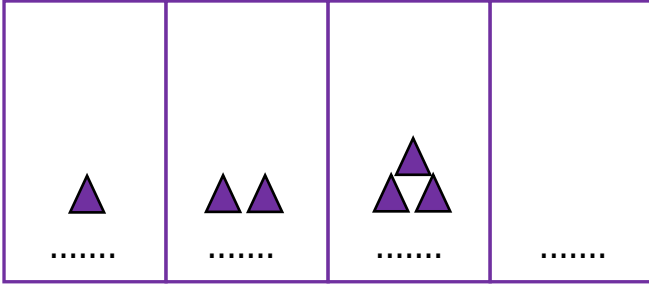
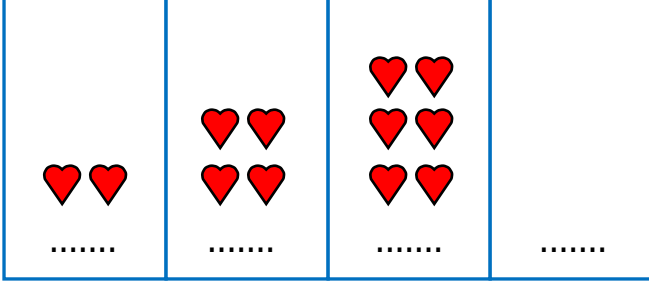


Adı Soyadı :

Numarası :

Konu: Sayılarla Örüntü Oluşturalım 3

Aşağıda verilen sayı örüntülerini modelleyerbirer adım ilerletelim.



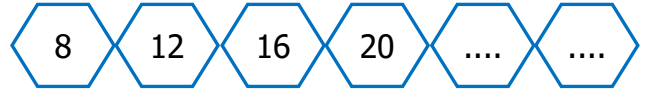
Aşağıdaki örüntünün kuralını belirleyip bir sonraki adımda yazılması gereken sayıyı yazalım.



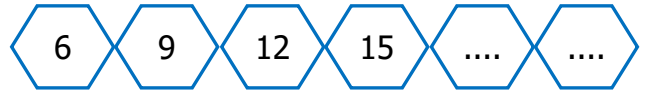
Kural:



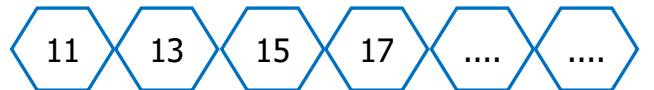
Kural:



Kural:



Kural:

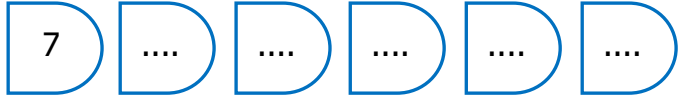


Kural:

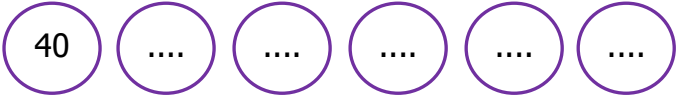


Kural:

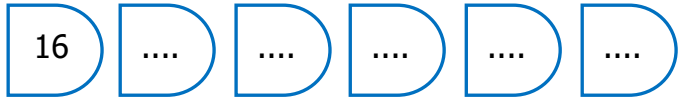
Aşağıda verilen sayılardan başlayarak kuralına uygun olarak örüntüyü devam ettiriniz.



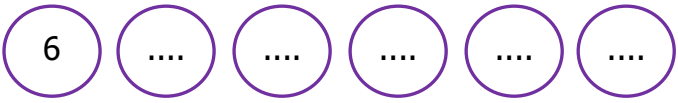
Kural: 2 artan



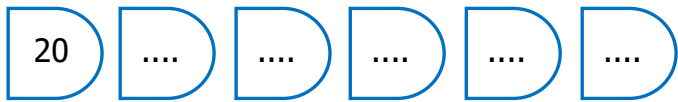
Kural: 3 azalan



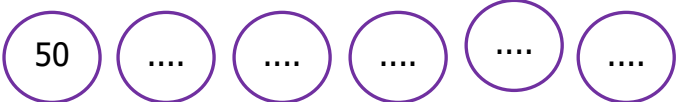
Kural: 5 artan



Kural: 3 artan, 1 azalan



Kural: 10 artan, 1 azalan



Kural: 4 azalan



Kural: 2 artan

Aşağıdaki örüntülerde noktalı yerlere uygun sayıları yazınız.

