






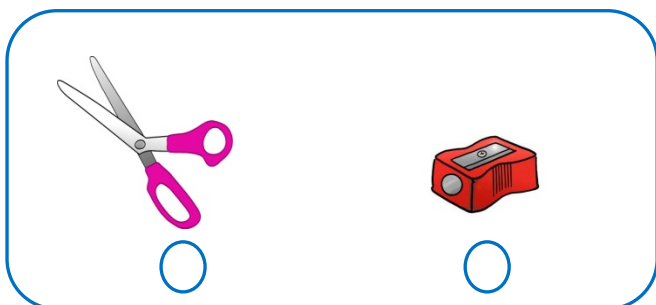
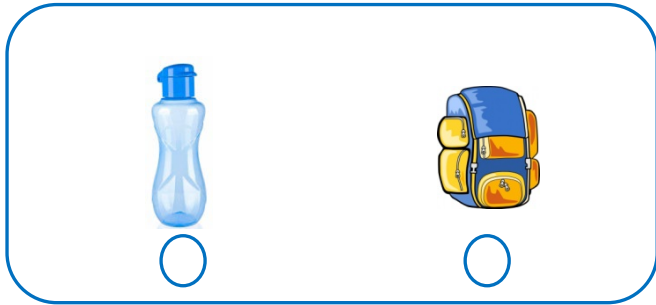
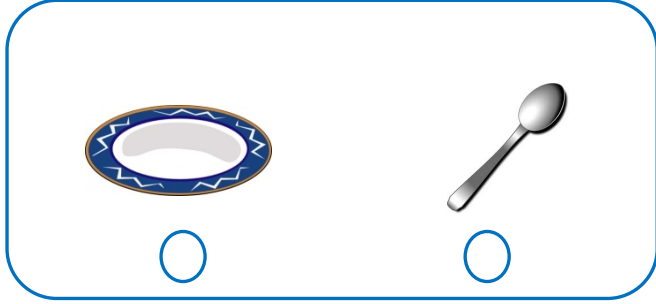
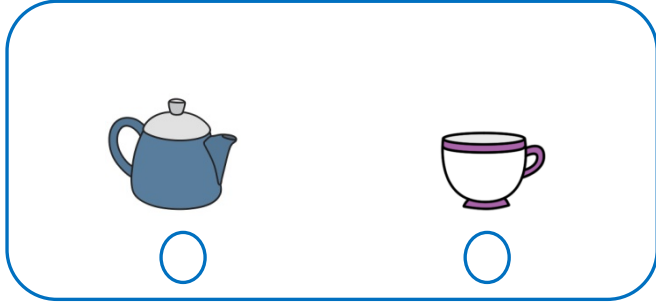
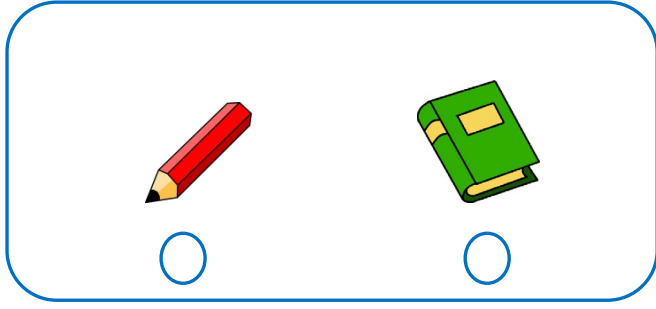
Adı Soyadı :

Numarası :

Konu: Tartma (Ağır - Hafif) Etkinliği 3

Aşağıdaki varlıklardan kuştan ağır olanların altındaki kutucuğu işaretleyelim.Aşağıdaki varlıklardan aslandan hafif olanların altındaki kutucuğu işaretleyelim.

Aşağıdaki varlıklardan ağır olanı işaretleyelim.



Aşağıdaki varlıklardan hafif olanı işaretleyelim.

