
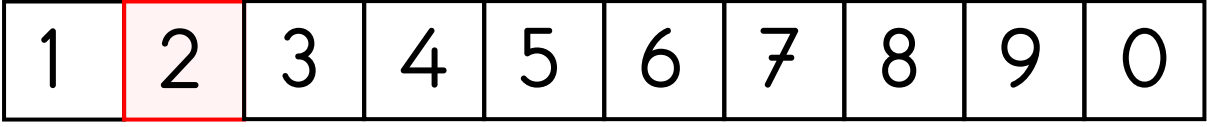



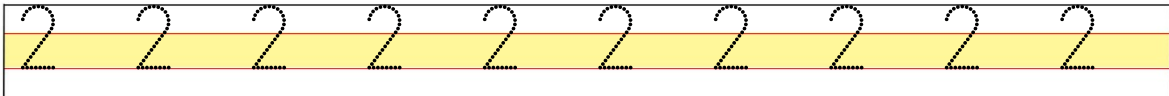
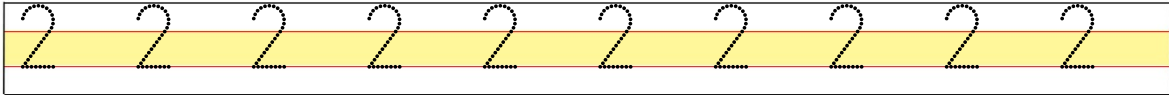



DOĞAL SAYILAR



Aşağıdaki satırlara verilen rakamı yazınız.



Aşağıdaki kaplumbağanın beneklerinden iki tanesini boyayalım.



Aşağıdaki sayılardan iki rakamlarını yuvarlak içine alınız.

$$\begin{array}{r} 3 \\ 2 \end{array} + \begin{array}{r} 4 \\ 2 \end{array} = \begin{array}{r} 1 \\ 2 \end{array}$$