




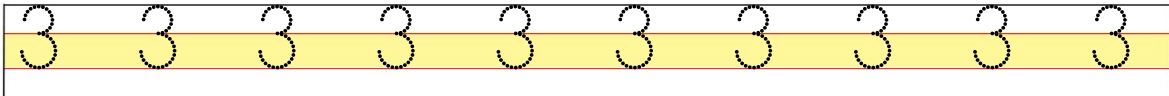
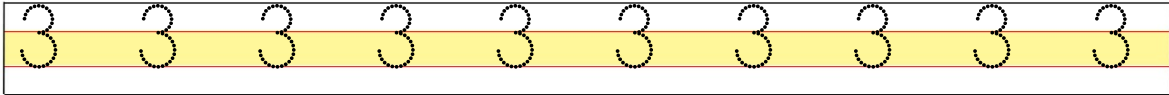


DOĞAL SAYILAR


1	2	3	4	5	6	7	8	9	0
---	---	---	---	---	---	---	---	---	---



Aşağıdaki satırlara verilen rakamı yazınız.



Aşağıdaki köpeğin beneklerinden üç tanesini boyayalım.



Aşağıdaki sayılardan üç rakamlarını yuvarlak içine alınız.

$$\begin{array}{r} 3 \\ 1 \end{array} + \begin{array}{r} - \\ 3 \end{array} = \begin{array}{r} 1 \\ 3 \end{array}$$