



Adı Soyadı :

Numarası :

Konu: Onluk ve Birlikleri Tanıyalım Etkinliği 4

Aşağıdaki şekillerin kaç onluk ve kaç birlik oluştuğunu örnekteki gibi yazalım.

1 onluk 2 birlik

12

On iki

..... onluk birlik

.....

.....

..... onluk birlik

.....

.....

..... onluk birlik

.....

.....

..... onluk birlik

.....

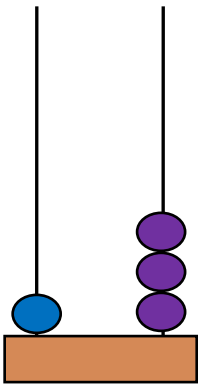
.....

..... onluk birlik

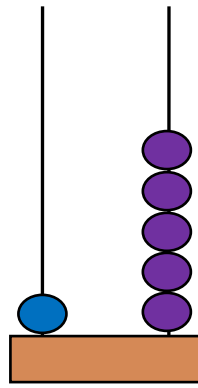
.....

.....

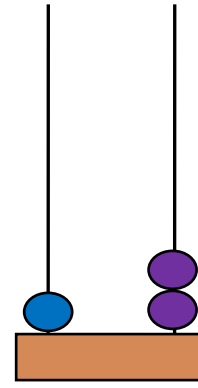
Aşağıdaki abaküslerin gösterdiği sayıları örnekteki gibi yazalım.



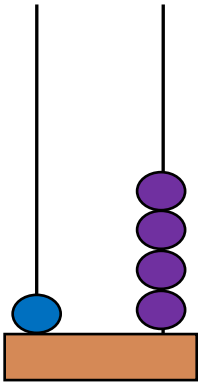
1 onluk 3 birlik
13



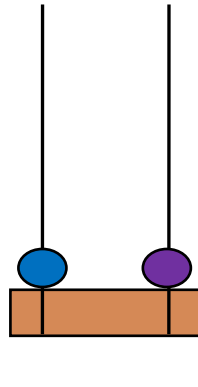
.... onluk birlik
.....



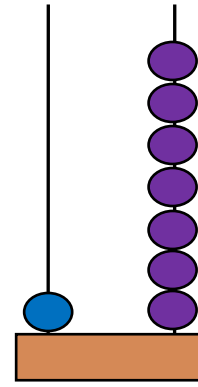
.... onluk birlik
.....



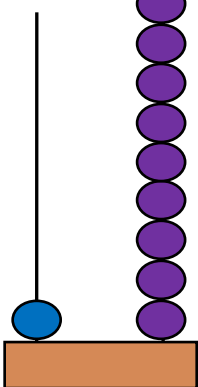
.... onluk birlik
.....



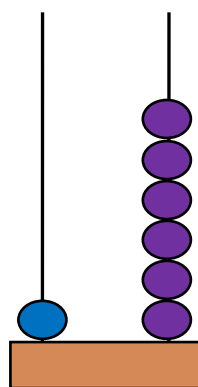
.... onluk birlik
.....



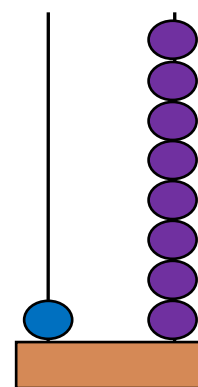
.... onluk birlik
.....



.... onluk birlik
.....



.... onluk birlik
.....



.... onluk birlik
.....