

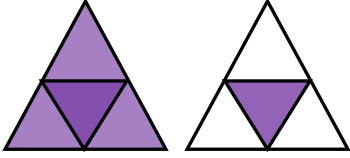


Adı Soyadı :

Numarası :

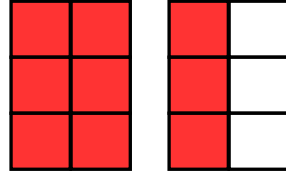
Konu: Bileşik Kesir Etkinliği 2

Şekillerin boyalı kısımlarının ifade ettiği bileşik kesirleri ve okunuşlarını örnekteki gibi yazalım.



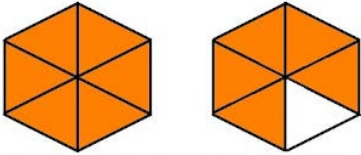
$$\frac{5}{4}$$

Dörtte beş veya beş bölü dört



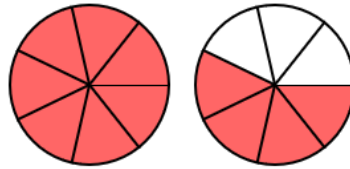
$$\frac{\dots}{\dots}$$

..... veya



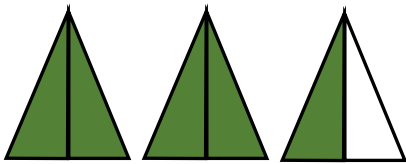
$$\frac{\dots}{\dots}$$

..... veya



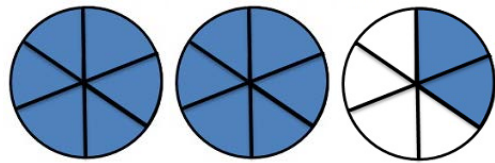
$$\frac{\dots}{\dots}$$

..... veya



$$\frac{\dots}{\dots}$$

..... veya



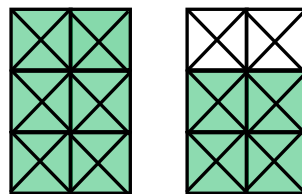
$$\frac{\dots}{\dots}$$

..... veya



$$\frac{\dots}{\dots}$$

..... veya

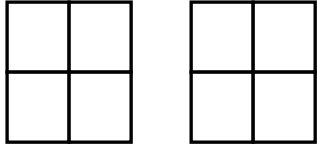


$$\frac{\dots}{\dots}$$


..... veya

Aşağıdaki kesir ifadelerine göre şekilleri boyayınız.

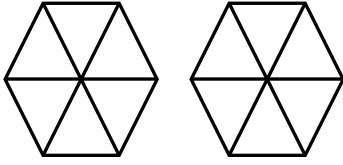
$$\frac{6}{4}$$



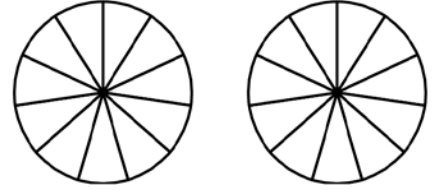
$$\frac{7}{4}$$



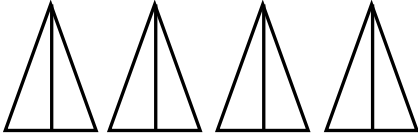
$$\frac{9}{6}$$



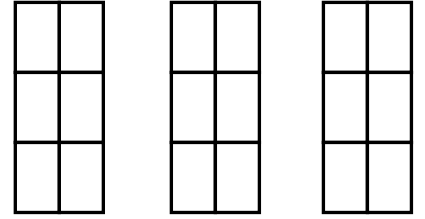
$$\frac{17}{11}$$



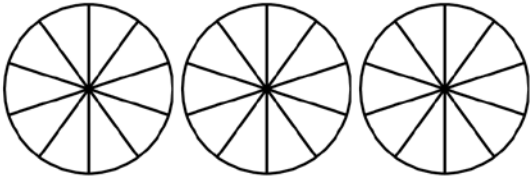
$$\frac{7}{2}$$



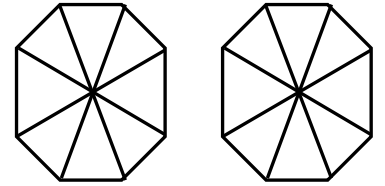
$$\frac{15}{6}$$



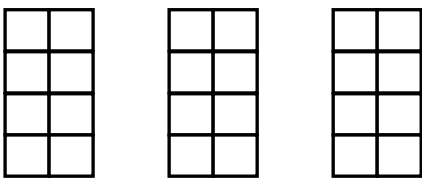
$$\frac{28}{10}$$



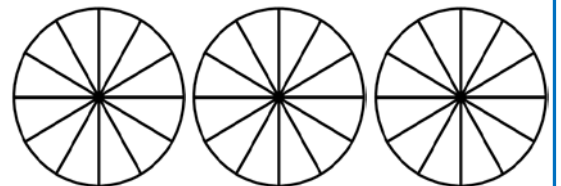
$$\frac{11}{8}$$



$$\frac{17}{8}$$

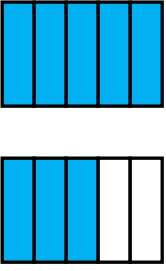


$$\frac{35}{12}$$



Aşağıda verilen kesirlerin örnekteki gibi okunuşunu yazarak modelle gösteriniz.

$\frac{8}{5}$ → beşte sekiz



$\frac{6}{3}$ →

$\frac{10}{4}$ →

$\frac{8}{6}$ →

$\frac{12}{6}$ →

$\frac{5}{8}$ →

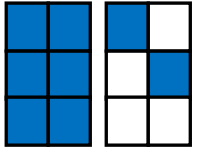
$\frac{12}{7}$ →

$\frac{13}{6}$ →

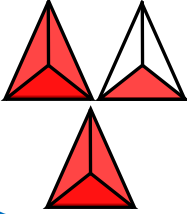
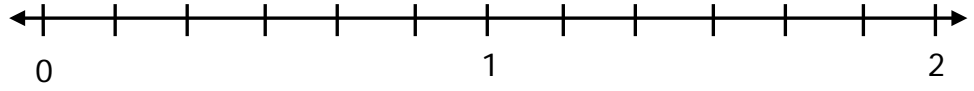
$\frac{20}{8}$ →

$\frac{15}{10}$ →

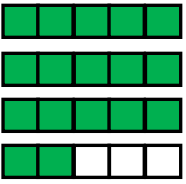
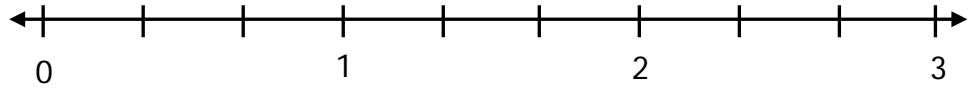
Aşağıda kesir modellerini kesir sayısı olarak yazarak sayı doğrusunda gösteriniz.



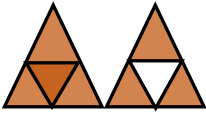
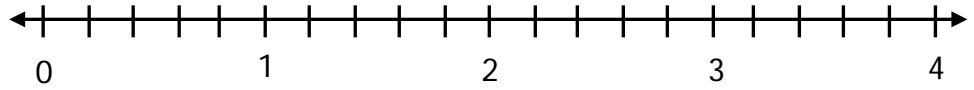
.....
.....



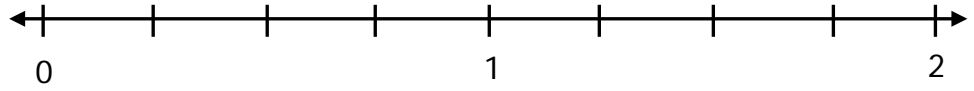
.....
.....



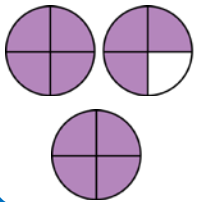
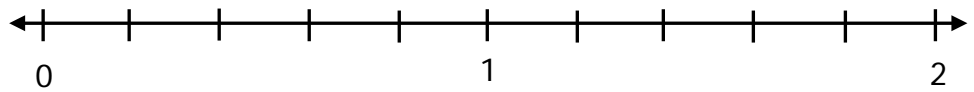
.....
.....



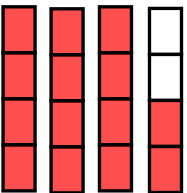
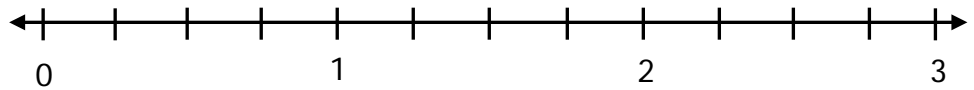
.....
.....



.....
.....



.....
.....



.....
.....

