



Adı Soyadı : .....

Numarası : .....

Konu: Doğal Sayıları Yazalım 1

Varlıkları birer ritmik sayınız. Noktalı yerlere varlık sayılarını yazınız.



Tavuk ..... tane yumurta yapmıştır.




Sincap ..... tane fındık toplamıştır.



Tırtıl ..... tane yaprak yemiştir.



Tavşan ..... tane havuç yemiştir.

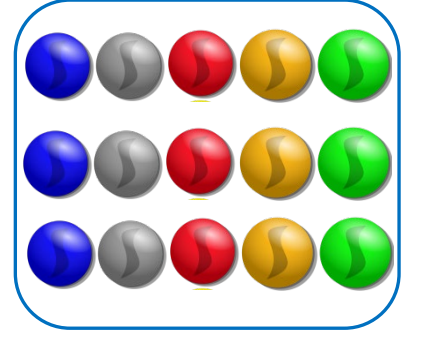


Kovandan ..... tane arı kaçmıştır.

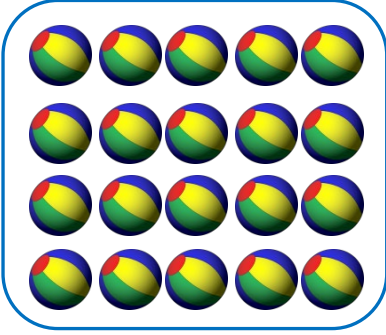
Varlık gruplarını, sayılarını gösteren rakamlarla örnekteki gibi eşleştirelim.




5



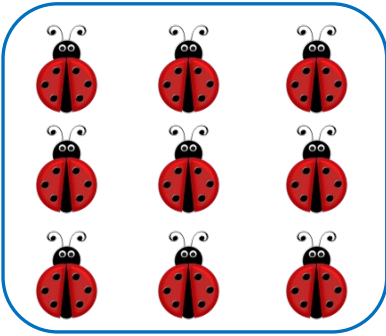
10




7




13



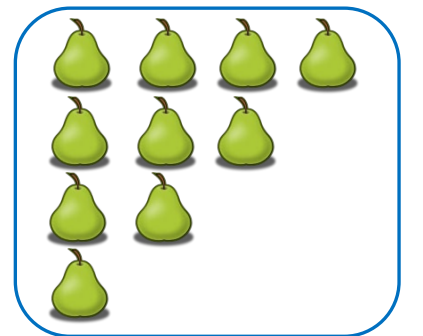
9



11



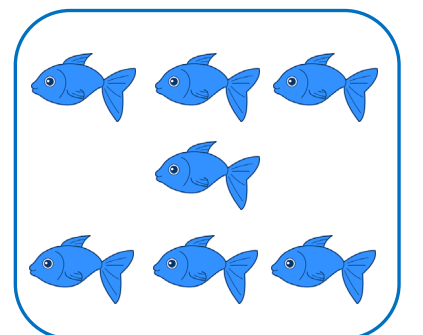
6



20



4



15