



Adı Soyadı :

Numarası :

Konu: Azlık - Çokluk Etkinliği 1

Aşağıdaki varlıkları sayınız. Daha az varlığın bulunduğu grubun altındaki kutucuğu "X" ile işaretleyiniz.

<input type="radio"/>	<input type="radio"/>

<input type="radio"/>	<input type="radio"/>

<input type="radio"/>	<input type="radio"/>

<input type="radio"/>	<input type="radio"/>

Aşağıdaki varlıkları sayınız. Daha çok varlığın bulunduğu grubun altındaki kutucuğu "X" ile işaretleyiniz.




<input type="radio"/>	<input type="radio"/>




<input type="radio"/>	<input type="radio"/>

<input type="radio"/>	<input type="radio"/>


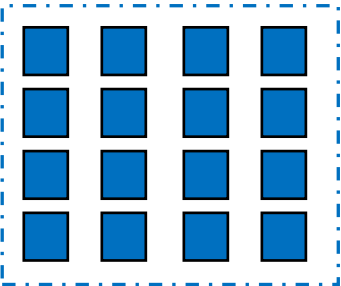

<input type="radio"/>	<input type="radio"/>




Gruplardan varlık sayısı en az olanı "X" ile işaretleyiniz.

 <input type="radio"/>	 <input type="radio"/>	 <input type="radio"/>
------------------------------------------------------------------------------------------------------------	------------------------------------------------------------------------------------------------------------	--------------------------------------------------------------------------------------------------------------

 <input type="radio"/>	 <input type="radio"/>	 <input type="radio"/>
------------------------------------------------------------------------------------------------------------	------------------------------------------------------------------------------------------------------------	--------------------------------------------------------------------------------------------------------------

Gruplardan varlık sayısı en çok olanı "X" ile işaretleyiniz.

 <input type="radio"/>	 <input type="radio"/>	 <input type="radio"/>
--------------------------------------------------------------------------------------------------------------	--------------------------------------------------------------------------------------------------------------	----------------------------------------------------------------------------------------------------------------

 <input type="radio"/>	 <input type="radio"/>	 <input type="radio"/>
--------------------------------------------------------------------------------------------------------------	--------------------------------------------------------------------------------------------------------------	----------------------------------------------------------------------------------------------------------------