



Adı Soyadı :

Numarası :

Konu: Modellerle Çıkarma İşlemi Etkinliği 2

Aşağıda verilen çıkarma işlemlerini örnekteki gibi yapınız.

$$4 - 1 = 3$$

$$\dots - \dots = \dots$$

$$\dots - \dots = \dots$$

$$\dots - \dots = \dots$$



$$\dots - \dots = \dots$$

$$\dots - \dots = \dots$$

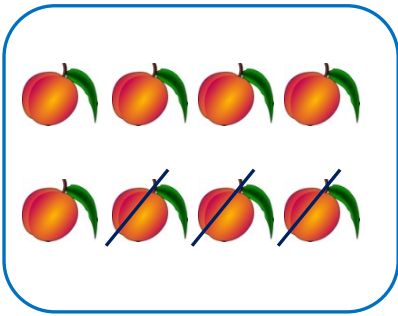
$$\dots - \dots = \dots$$

$$\dots - \dots = \dots$$

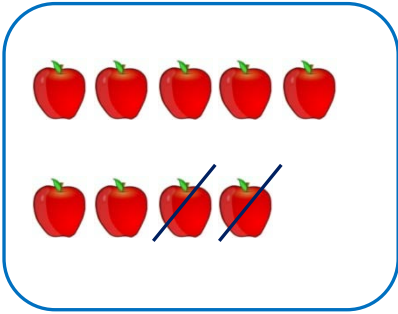
Aşağıda verilen çıkarma işlemlerini
örnekteki gibi yapınız.




$$6 - 1 = 5$$



$$\dots - \dots = \dots$$



$$\dots - \dots = \dots$$



$$\dots - \dots = \dots$$

Aşağıda verilen çıkarma işlemlerini
örnekteki gibi yapınız.

