



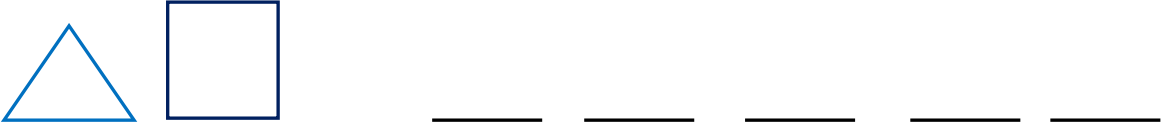
Adı Soyadı :

Numarası :

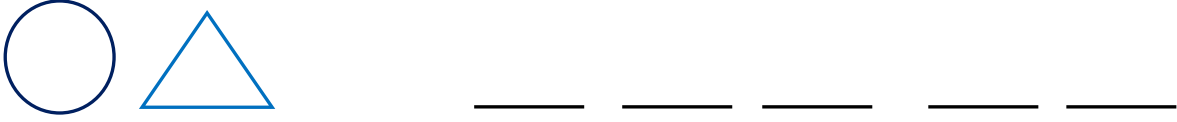
Konu: Örüntüyü Oluşturalım

A) Aşağıdaki şekillerle belirtilen kurallara uygun örüntüler oluşturalım.

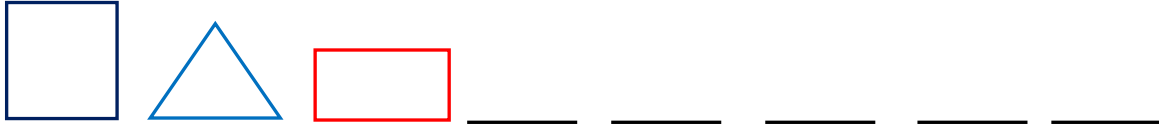
a) **Kural:** 1 üçgen, 1 kare



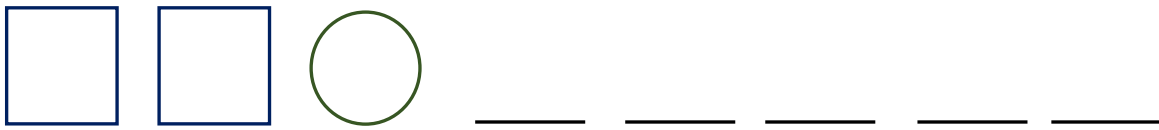
b) **Kural:** 1 çember, 1 üçgen



c) **Kural:** 1 kare, 1 üçgen, 1 dikdörtgen



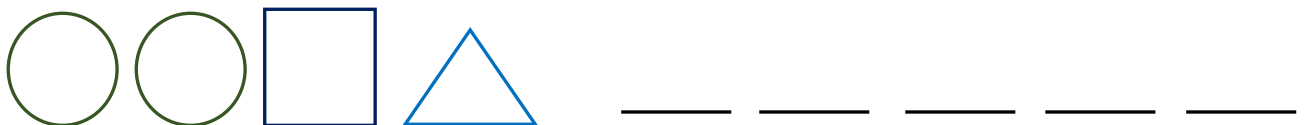
d) **Kural:** 2 kare, 1 çember



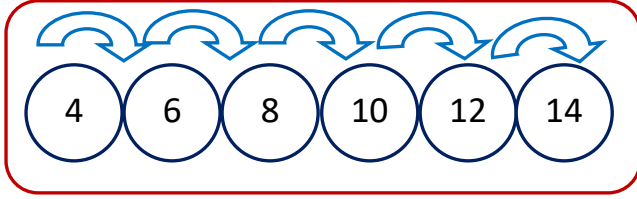
e) **Kural:** 1 kare, 2 üçgen, 1 dikdörtgen



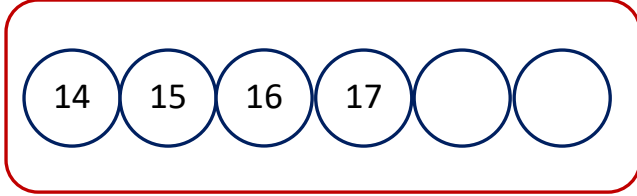
f) **Kural:** 2 çember 1 kare 1 üçgen



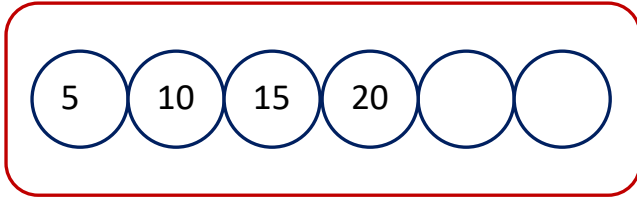
A) Aşağıdaki örüntülerin kuralını örnekteki gibi inceleyelim. Kuralına göre boş bırakılan kutulara uygun sayılar yazalım.



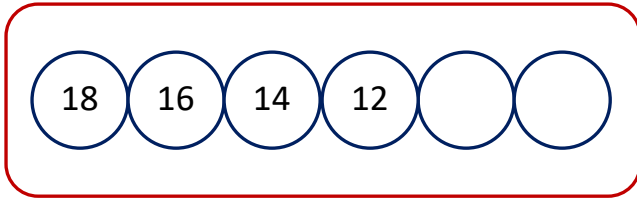
Kural: Sayılar ikişer ikişer artıyor.



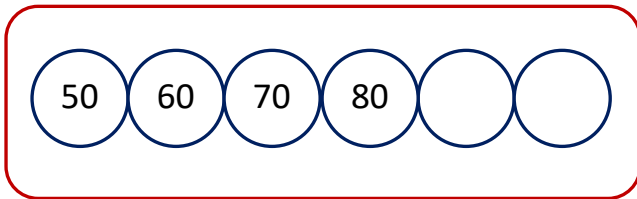
Kural:



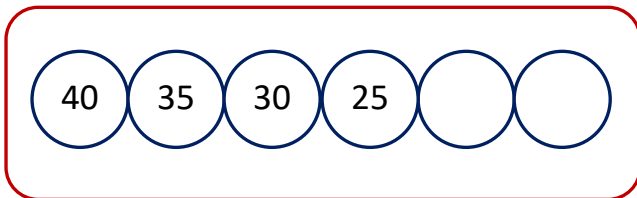
Kural:



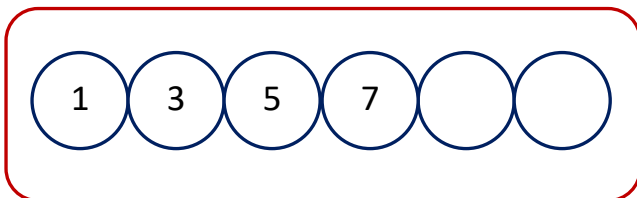
Kural:



Kural:



Kural:



Kural: