

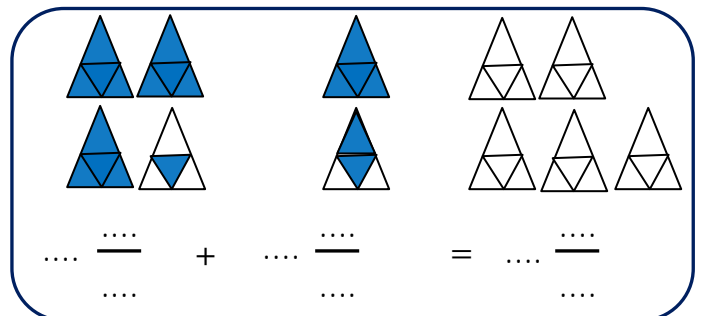
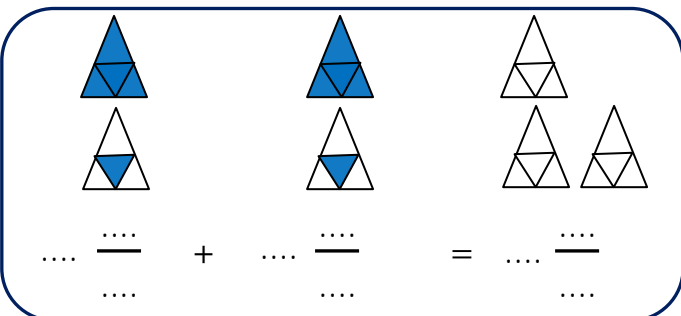
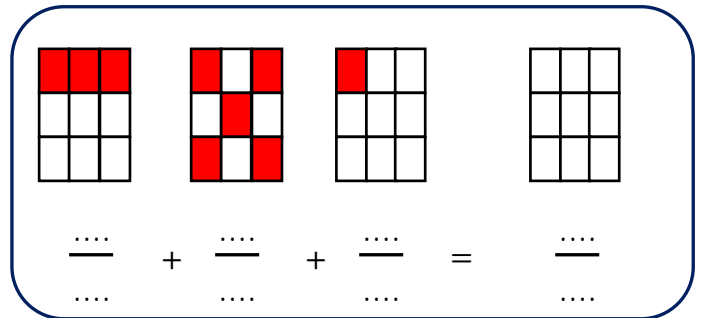
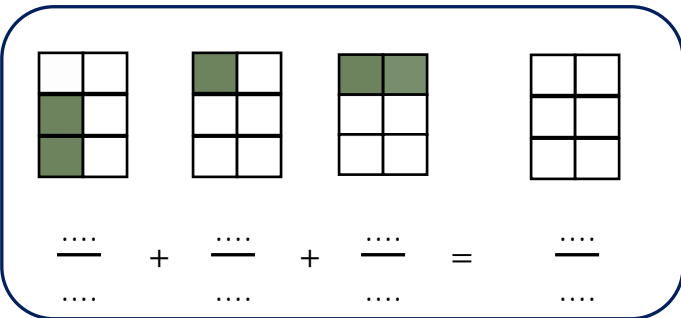
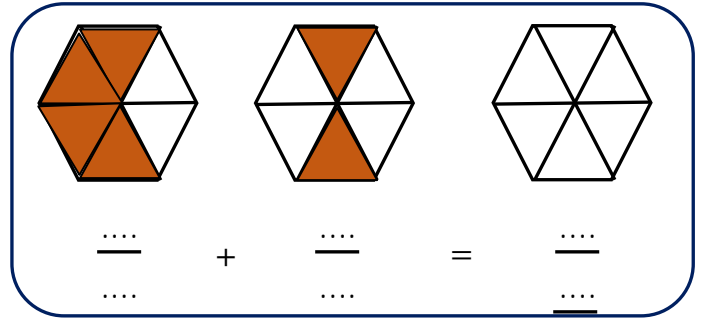
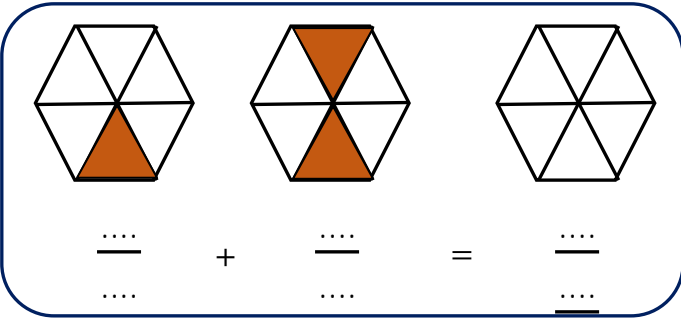
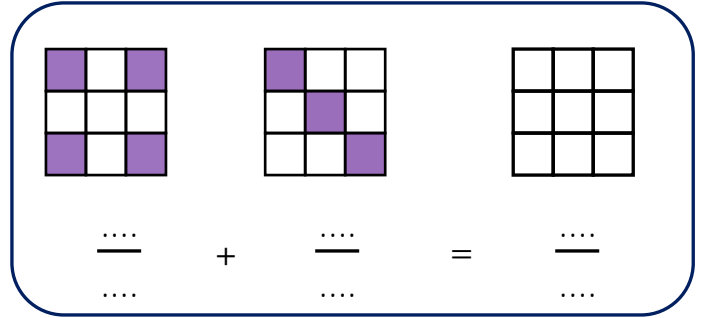
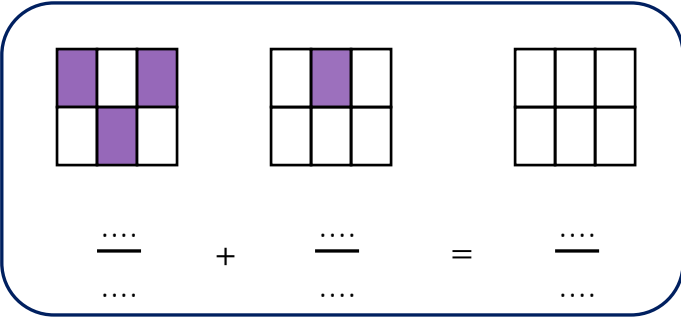
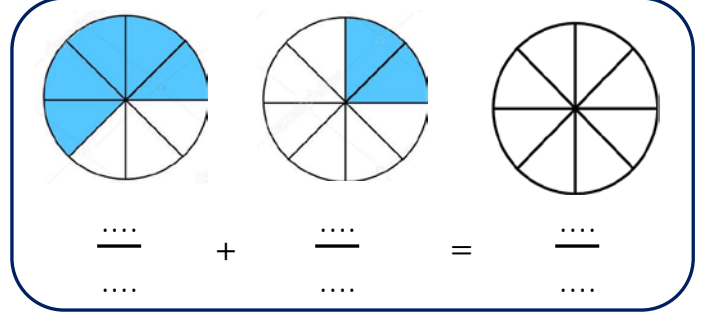
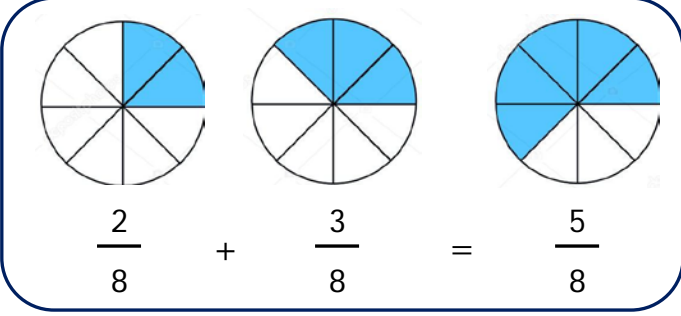


Adı Soyadı :

Numarası :

Konu: Paydaları Eşit Kesirlerde Toplama İşlemi Etkinliği 2

Aşağıda modellenen kesirleri yazınız. Kesirleri toplayarak örnekteki gibi model üzerinde gösteriniz.



Aşağıdaki toplama işlemlerini örnekteki gibi yapınız.

$$\frac{3}{5} + \frac{4}{5} = \frac{7}{5}$$

$$\frac{2}{4} + \frac{3}{4} = \frac{\dots}{\dots}$$

$$\frac{5}{9} + \frac{6}{9} = \frac{\dots}{\dots}$$

$$\frac{3}{10} + \frac{6}{10} = \frac{\dots}{\dots}$$

$$\frac{5}{15} + \frac{4}{15} = \frac{\dots}{\dots}$$

$$\frac{6}{20} + \frac{7}{20} = \frac{\dots}{\dots}$$

$$\frac{2}{8} + \frac{7}{8} = \frac{\dots}{\dots}$$

$$\frac{4}{6} + \frac{8}{6} = \frac{\dots}{\dots}$$

$$\frac{7}{12} + \frac{9}{12} = \frac{\dots}{\dots}$$

$$\frac{8}{16} + \frac{7}{16} = \frac{\dots}{\dots}$$

$$\frac{6}{14} + \frac{9}{14} = \frac{\dots}{\dots}$$

$$\frac{3}{7} + \frac{6}{7} = \frac{\dots}{\dots}$$

Aşağıdaki toplama işlemlerini yapınız.

$$\frac{3}{9} + \frac{2}{9} + \frac{5}{9} = \frac{\dots}{\dots}$$

$$\frac{4}{14} + \frac{6}{14} + \frac{2}{14} = \frac{\dots}{\dots}$$

$$\frac{9}{20} + \frac{10}{20} + \frac{3}{20} = \frac{\dots}{\dots}$$

$$\frac{1}{8} + \frac{4}{8} + \frac{2}{8} = \frac{\dots}{\dots}$$

$$\frac{6}{7} + \frac{4}{7} + \frac{3}{7} = \frac{\dots}{\dots}$$

$$\frac{6}{10} + \frac{5}{10} + \frac{8}{10} = \frac{\dots}{\dots}$$

$$\frac{7}{11} + \frac{3}{11} + \frac{1}{11} = \frac{\dots}{\dots}$$

$$\frac{3}{19} + \frac{8}{19} + \frac{5}{19} = \frac{\dots}{\dots}$$

$$\frac{4}{13} + \frac{9}{13} + \frac{6}{13} = \frac{\dots}{\dots}$$

Aşağıdaki toplama işlemlerini yapınız.

$$3 \frac{3}{8} + 1 \frac{2}{8} + 2 \frac{5}{8} = \dots \frac{\dots}{\dots}$$

$$1 \frac{2}{10} + 4 \frac{5}{10} + 3 \frac{3}{10} = \dots \frac{\dots}{\dots}$$

$$\frac{1}{7} + 2 \frac{3}{7} + 4 \frac{2}{7} = \dots \frac{\dots}{\dots}$$

$$\frac{2}{9} + \frac{5}{9} + 1 \frac{1}{9} = \dots \frac{\dots}{\dots}$$

$$2 \frac{3}{15} + 3 \frac{5}{15} + \frac{4}{15} = \dots \frac{\dots}{\dots}$$

$$3 \frac{4}{12} + \frac{6}{12} + 6 \frac{2}{12} = \dots \frac{\dots}{\dots}$$