

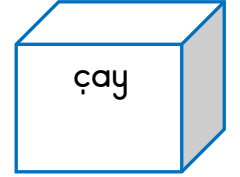
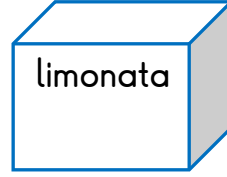
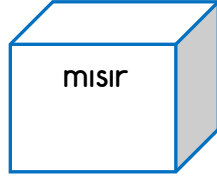
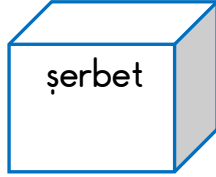
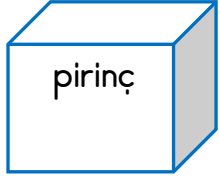
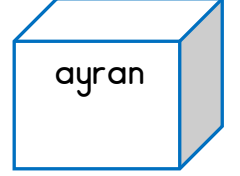
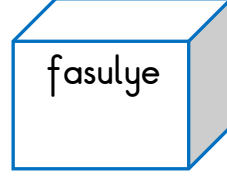
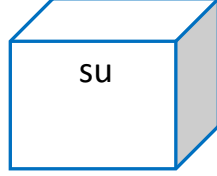
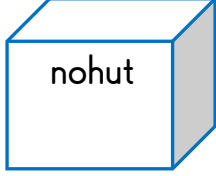
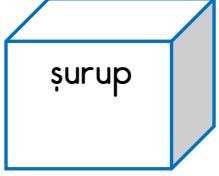


Numarası : .....

Adı Soyadı : .....

Konu: Sıvıları Ölçme

1) Aşağıdaki maddelerden sıvı olanların küpünü maviye boyayınız.



2) Yandaki tencere aşağıdakilerden hangisiyle çabuk dolar?



A)



B)



C)



3) Aşağıdakilerden hangisi sıvıdır?

A)



B)



C)



4) Aşağıdakilerden hangisi daha çok su alır?

A)



B)



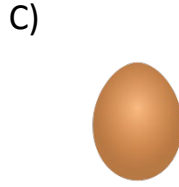

C)



5) Yandaki su dolu havuzu en çabuk hangisiyle boşaltırız?



6) Aşağıdakilerden hangisi sıvı madde değildir?



7) Aşağıdaki nesnelere aldıkları sıvı miktarına göre **azdan çoğa** doğru numaralandırınız.



8) Marketten aldığımız ürünlerden hangisini bardakla ölçebiliriz?



9) Aşağıdaki görsellerden sıvı olanların kutularına "X" işareti koyalım.

