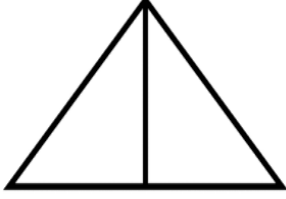




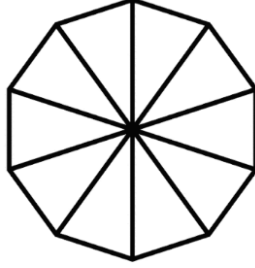
## KESİRLER



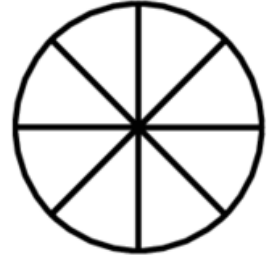
Aşağıdaki şekillerde verilen kesir kadarını boyyalım ve yanlarına birim kesirlerini yazalım.



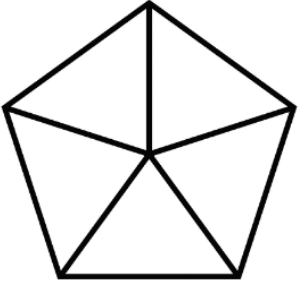
$$\frac{1}{2} \rightarrow \frac{\dots}{\dots}$$



$$\frac{7}{10} \rightarrow \frac{\dots}{\dots}$$



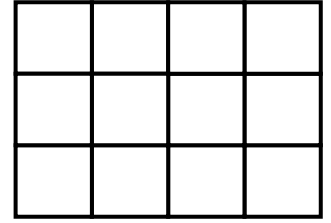
$$\frac{5}{8} \rightarrow \frac{\dots}{\dots}$$



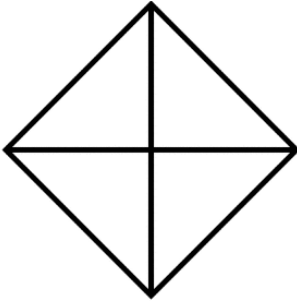
$$\frac{3}{5} \rightarrow \frac{\dots}{\dots}$$




$$\frac{4}{6} \rightarrow \frac{\dots}{\dots}$$



$$\frac{9}{12} \rightarrow \frac{\dots}{\dots}$$



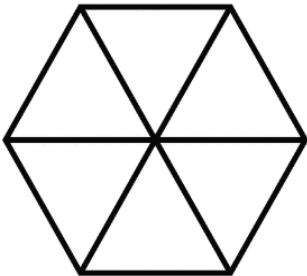
$$\frac{3}{4} \rightarrow \frac{\dots}{\dots}$$



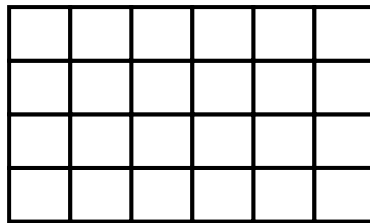
$$\frac{5}{5} \rightarrow \frac{\dots}{\dots}$$



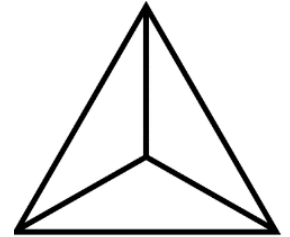
$$\frac{2}{3} \rightarrow \frac{\dots}{\dots}$$



$$\frac{6}{6} \rightarrow \frac{\dots}{\dots}$$



$$\frac{15}{24} \rightarrow \frac{\dots}{\dots}$$



$$\frac{1}{3} \rightarrow \frac{\dots}{\dots}$$