

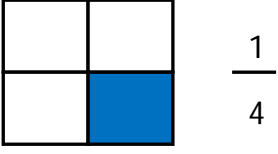


Adı Soyadı : .....

Numarası : .....

Konu: Kesirler (Payı Paydasından Küçük Kesirler Elde Edelim) Etkinliği

Şekillerin boyalı kısımlarının ifade ettiği basit kesirleri ve okunuşlarını örnekteki gibi yazalım.


 $\frac{1}{4}$ 

Dörtte bir  
veya  
Bir bölü dört


 $\frac{\dots}{\dots}$ 

.....  
veya  
.....


 $\frac{\dots}{\dots}$ 


.....  
veya  
.....


 $\frac{\dots}{\dots}$ 

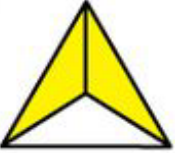
.....  
veya  
.....


 $\frac{\dots}{\dots}$ 

.....  
veya  
.....


 $\frac{\dots}{\dots}$ 


.....  
veya  
.....


 $\frac{\dots}{\dots}$ 

Dörtte bir  
veya  
Bir bölü dört


 $\frac{\dots}{\dots}$ 


.....  
veya  
.....


 $\frac{\dots}{\dots}$ 

.....  
veya  
.....


 $\frac{\dots}{\dots}$ 

.....  
veya  
.....

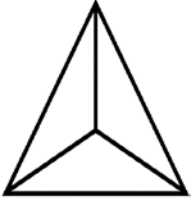

 $\frac{\dots}{\dots}$ 

.....  
veya  
.....

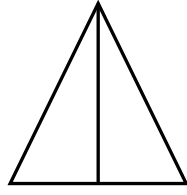

 $\frac{\dots}{\dots}$ 

.....  
veya  
.....

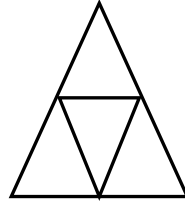
Aşağıdaki şekillerin belirtilen kesir kadarını boyayalım.



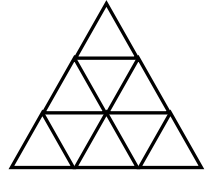
$$\frac{2}{3}$$



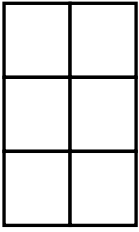
$$\frac{1}{2}$$



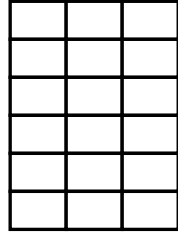
$$\frac{2}{4}$$



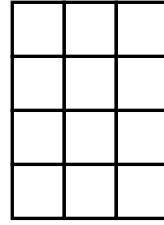
$$\frac{3}{9}$$




$$\frac{4}{6}$$



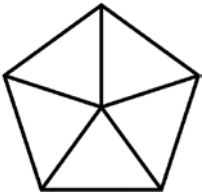
$$\frac{4}{18}$$



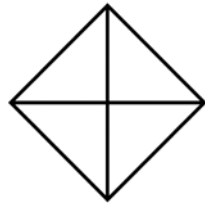
$$\frac{8}{12}$$



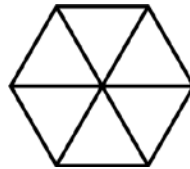
$$\frac{10}{30}$$



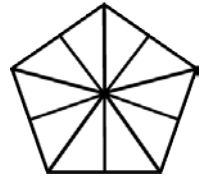
$$\frac{3}{5}$$



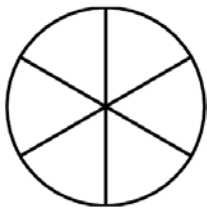
$$\frac{2}{4}$$



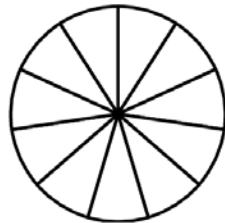
$$\frac{4}{6}$$



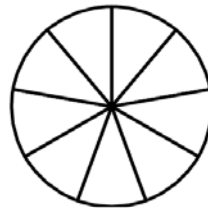
$$\frac{5}{10}$$



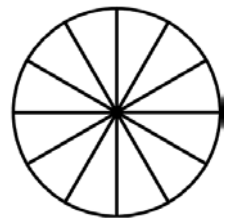
$$\frac{3}{6}$$



$$\frac{2}{11}$$




$$\frac{6}{9}$$




$$\frac{5}{12}$$


Aşağıdaki şekilleri, verilen kesirlere göre eşit parçalara ayıralım, belirtilen kesir kadarını boyyalım.




$$\frac{1}{2}$$




$$\frac{2}{4}$$




$$\frac{4}{8}$$




$$\frac{3}{6}$$




$$\frac{3}{4}$$




$$\frac{5}{6}$$




$$\frac{4}{10}$$




$$\frac{7}{12}$$




$$\frac{3}{9}$$



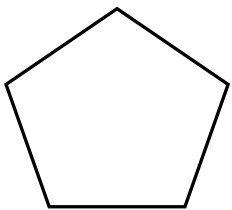
$$\frac{3}{15}$$



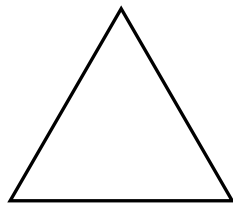
$$\frac{3}{8}$$



$$\frac{6}{14}$$



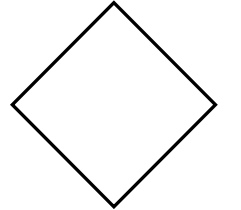
$$\frac{1}{2}$$



$$\frac{2}{4}$$



$$\frac{2}{8}$$



$$\frac{1}{4}$$