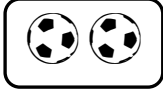
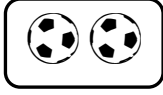
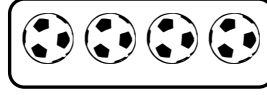


ÇARPMA İŞLEMİ

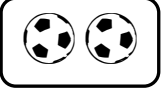

1. Etkinlik: Aşağıda verilen çarpma işlemlerini yapınız.



$4 \times 2 = 8$



$2 \times 4 = 8$



$4 \times 2 = 2 \times 4$

$5 \times 3 = \dots\dots$

$6 \times 4 = \dots\dots$

$2 \times 3 = \dots\dots$

$8 \times 5 = \dots\dots$

$3 \times 5 = \dots\dots$

$4 \times 6 = \dots\dots$

$3 \times 2 = \dots\dots$

$5 \times 8 = \dots\dots$

$7 \times 2 = \dots\dots$

$6 \times 1 = \dots\dots$

$9 \times 3 = \dots\dots$

$4 \times 3 = \dots\dots$

$2 \times 7 = \dots\dots$

$1 \times 6 = \dots\dots$

$3 \times 9 = \dots\dots$

$3 \times 4 = \dots\dots$

$6 \times 5 = \dots\dots$

$9 \times 2 = \dots\dots$

$8 \times 4 = \dots\dots$


$9 \times 1 = \dots\dots$

$5 \times 6 = \dots\dots$

$2 \times 9 = \dots\dots$

$4 \times 8 = \dots\dots$

$1 \times 9 = \dots\dots$



2. Etkinlik: Aşağıda verilen çarpma işlemlerindeki verilmeyen sayıları yazınız.

$6 \times 2 = 2 \times \dots\dots$

$5 \times 3 = \dots\dots \times 5$

$\dots\dots \times 4 = 4 \times 6$

$8 \times \dots\dots = 1 \times 8$

$4 \times 3 = 3 \times \dots\dots$

$7 \times 5 = \dots\dots \times 7$

$\dots\dots \times 2 = 2 \times 5$

$9 \times \dots\dots = 3 \times 9$

$6 \times 1 = 1 \times \dots\dots$

$2 \times 10 = \dots\dots \times 2$

$\dots\dots \times 4 = 4 \times 8$

$5 \times \dots\dots = 5 \times 9$

$7 \times 3 = 3 \times \dots\dots$

$10 \times 3 = \dots\dots \times 10$

$\dots\dots \times 8 = 8 \times 2$