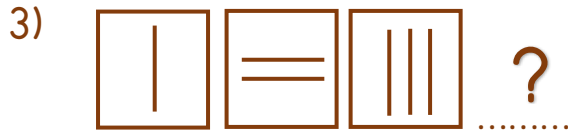





Soru işaretinin yerine gelmesi gereken şekil hangisidir?



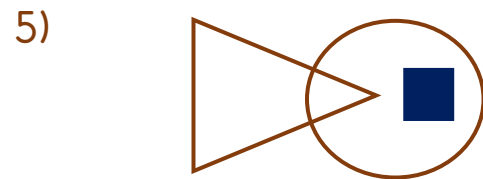
Soru işaretinin yerine gelmesi gereken ok hangisidir?



Soru işaretinin yerine hangi kare gelmelidir?



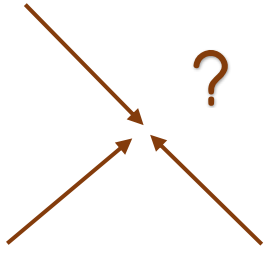
Boş karenin içine hangi yüz ifadesi gelmelidir?



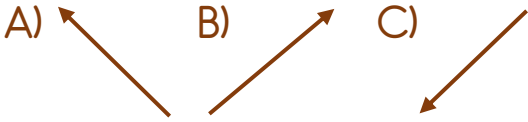
Yukarıdaki görselde karenin bulunduğu yer ile ilgili hangi ifade doğrudur?

- A) Üçgenin içinde, çemberin dışındadır.
 B) Üçgenin dışında, çemberin içindedir.
 C) Üçgenin ve çemberin içindedir.


6)



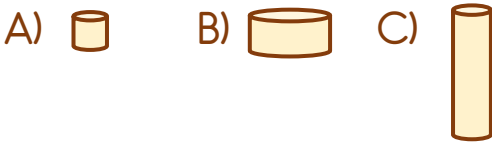
Soru işaretinin yerine hangi ok gelmelidir?



7)



Boş karenin içine hangisi gelmelidir?



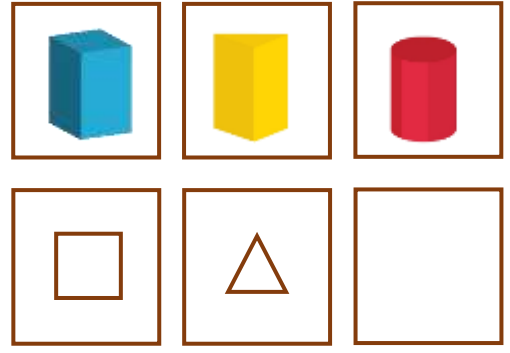
8)



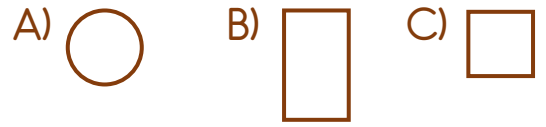
Soru işaretinin yerine hangisi gelmelidir?



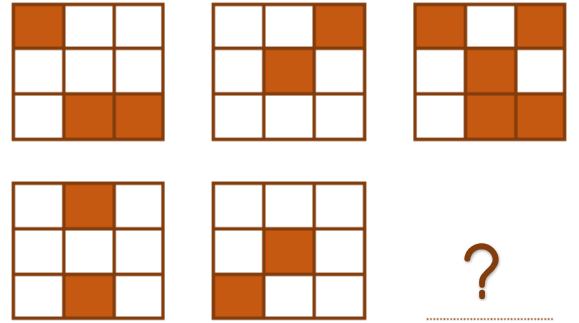
9)



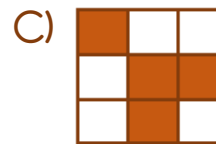
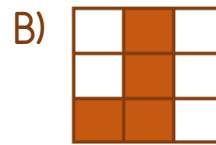
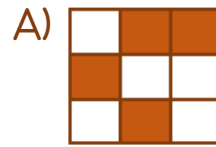
Boş karenin içine hangisi gelmelidir?



10)



Soru işaretinin yerine hangisi gelmelidir?



Cevap Anahtarı

1-B 2-C 3-B 4-A 5-B 6-C 7-C 8-C 9-A 10-B