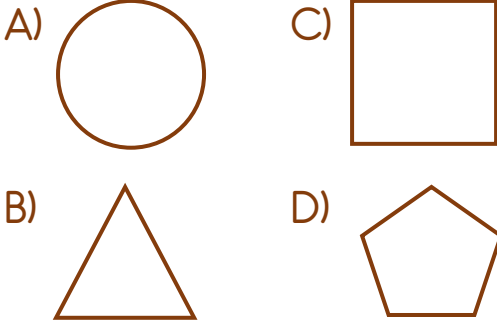
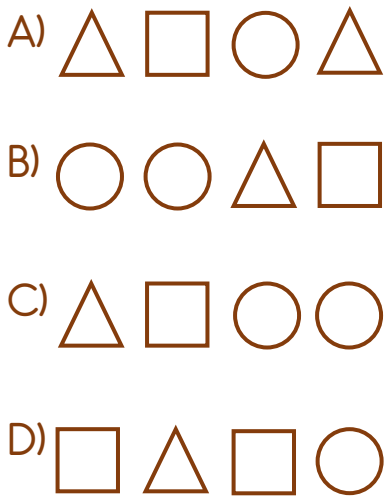


1) Hangi şekil bir yönüyle diğerlerinden farklıdır?



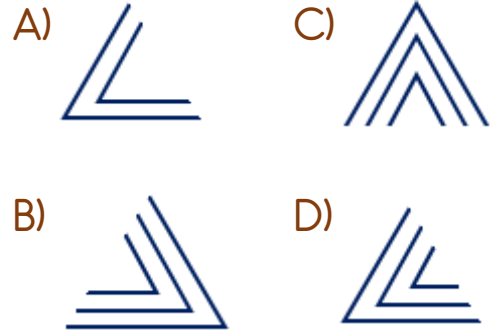
Yukarıdaki yüz ifadeleri ile aynı şekilde sıralanan seçenek hangisidir?



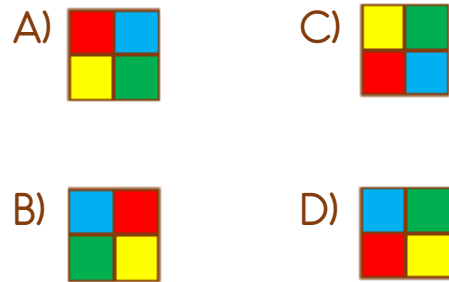
3)



Yukarıdaki şekil hangi parça ile tamamlanabilir?



Soru işaretinin yerine hangisi gelmelidir?




5)



Hangisi yukarıdaki şeklin bir parçasıdır?



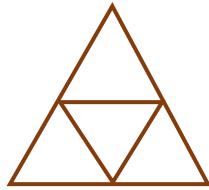
6)



Yukarıdaki trenin yapımında hangisi kullanılmamıştır?



7) Yandaki şekilde kaç tane üçgen vardır?



A) 3 B) 4 C) 5 D) 6

8)



Yukarıdaki evin çizilme sırası hangi kelimeyi oluşturur?

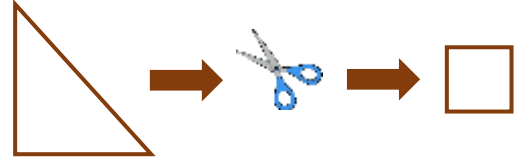
A) ASLI

C) SALI

B) ISLA

D) SILA

9)



Yukarıdaki üçgen kâğıt katlanmadan ve makas ile kesilerek kare kâğıt elde edilecektir.

Üçgen kâğıt, makas ile en az kaç defa kesilerek kare elde edilebilir?

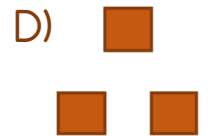
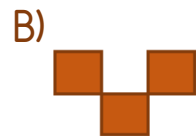
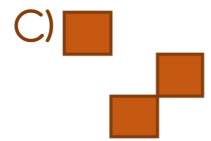
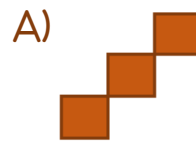

A) 1

B) 2

C) 3

D) 4

10) Yandaki kare hangisi ile tamamlanabilir?



## Cevap Anahtarı

1-A 2-C 3-D 4-D 5-B 6-A 7-C 8-C 9-B 10-B