

BÖLME İŞLEMİNİ KAVRAYALIM

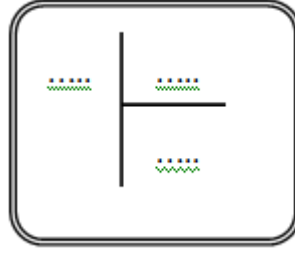
1. Etkinlik : Verilen çıkarma işlemlerini tamamlayıp, bölme işlemi olarak gösterelim.

a.)

$$\begin{aligned} 9 - 3 &= \dots \\ \dots - 3 &= \dots \\ \dots - 3 &= \dots \end{aligned}$$



..... işlem yaptık.


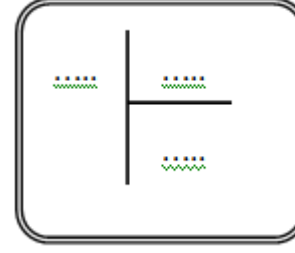


b.)

$$\begin{aligned} 12 - 4 &= \dots \\ \dots - 4 &= \dots \\ \dots - 4 &= \dots \end{aligned}$$



..... işlem yaptık.

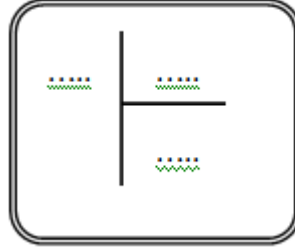


c.)

$$\begin{aligned} 20 - 5 &= \dots \\ \dots - 5 &= \dots \\ \dots - 5 &= \dots \\ \dots - 5 &= \dots \end{aligned}$$



..... işlem yaptık.


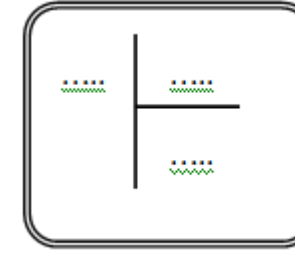


ç.)

$$\begin{aligned} 14 - 2 &= \dots \\ \dots - 2 &= \dots \\ \dots - 2 &= \dots \\ \dots - 2 &= \dots \\ \dots - 2 &= \dots \\ \dots - 2 &= \dots \\ \dots - 2 &= \dots \end{aligned}$$



..... işlem yaptık.



c.)

$$\begin{aligned} 18 - 3 &= \dots \\ \dots - 3 &= \dots \\ \dots - 3 &= \dots \\ \dots - 3 &= \dots \\ \dots - 3 &= \dots \\ \dots - 3 &= \dots \end{aligned}$$



..... işlem yaptık.

