




Adı Soyadı :


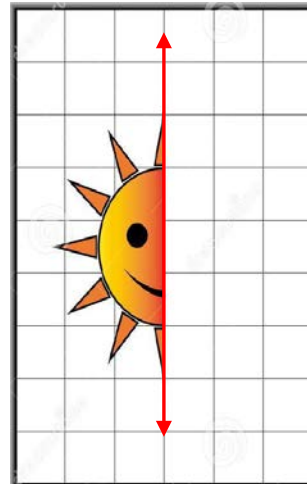
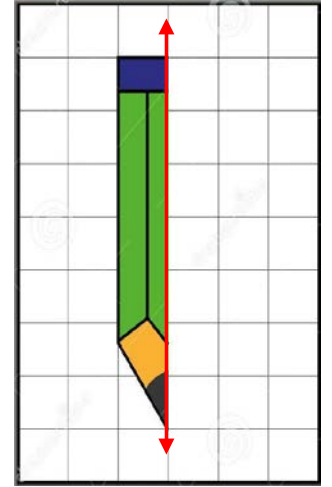
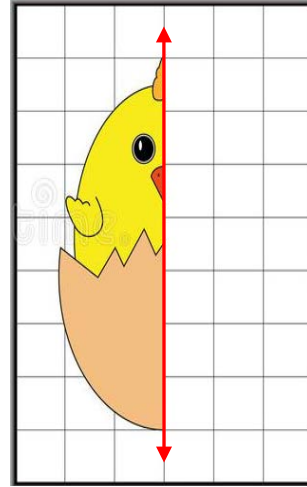
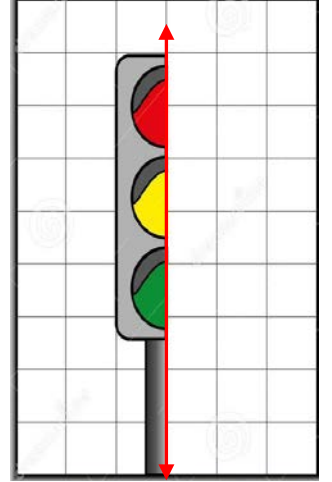
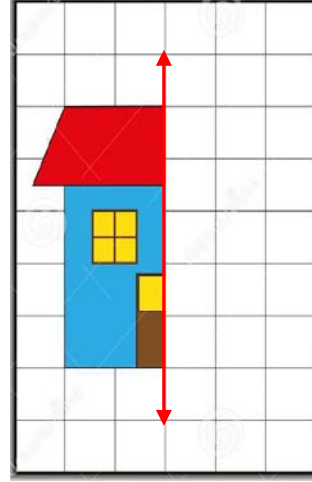
Numarası :

Konu: Simetri Etkinliği 5

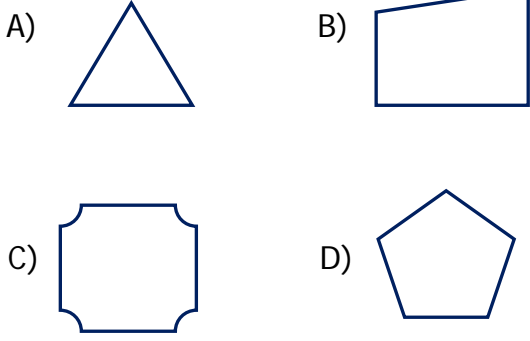
Aşağıda verilen görsellerin simetri doğrularını çizelim.



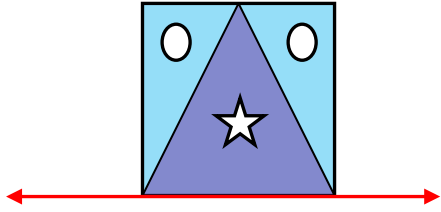
Şekillerin verilen simetri doğrusuna göre simetriğini çizelim.



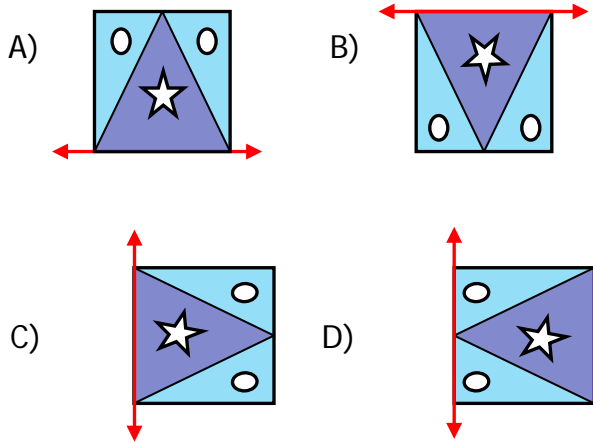
1) Aşağıda verilen geometrik şekillerin hangisinin simetri doğrusu yoktur?



2)




Yukarıda verilen şeklin doğruya göre simetriği hangisidir?

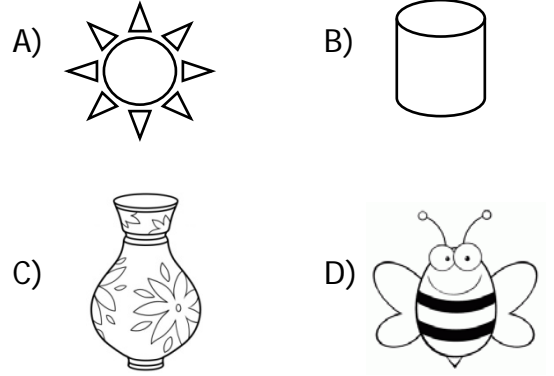


3) Yandaki geometrik şeklin kaç tane simetri doğrusu vardır?

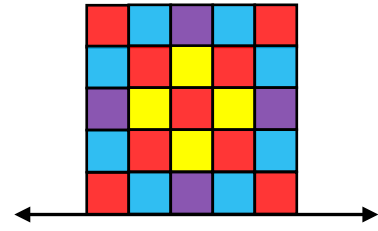
- A) 2 B) 4
C) 6 D) 8



4) Aşağıdaki şekillerden hangisinin simetri doğrusu daha fazladır?



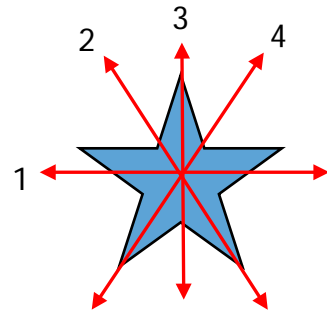
5)



Yandaki tabloda doğruya göre simetriği çizilirse şeklin tamamında kaç kırmızı kare olur?

- A) 18 B) 19
C) 20 D) 21

6)



Yukarıdaki şekilde kaç numaralı doğru, şeklin simetri doğrusudur?

- A) 1 B) 2 C) 3 D) 4