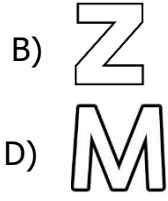
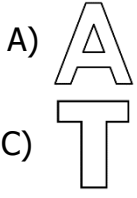



### Simetri

1) Aşağıdaki harflerden hangisi simetrik değildir?

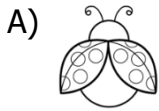


2) Yandaki şekle kaç tane simetri doğrusu çizilebilir?

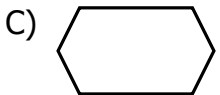



- A) 4 B) 3 C) 5 D) 2

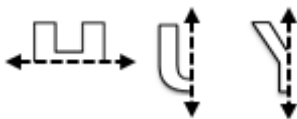
3) Aşağıdakilerin hangisinde simetri doğrusu çizilemez ?



4) Aşağıdaki şekillerden hangisinin simetri doğrusu daha fazladır ?



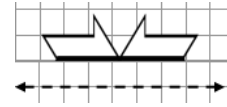
5)



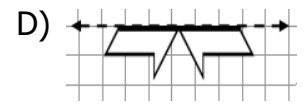
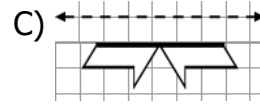
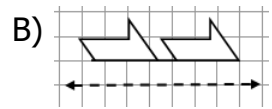
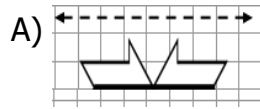
Yukarıdaki harfler simetrileriyle tamamlanır-  
sa aşağıdakilerden hangisi ortaya çıkar?

- A) HIY B) ULY C) HUY D) HLY

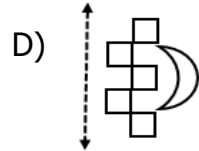
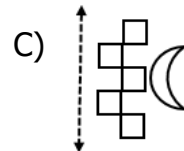
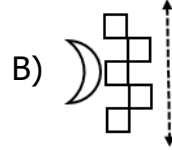
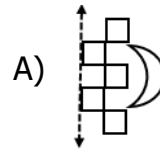
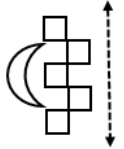
6)



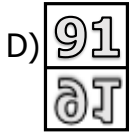
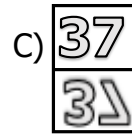
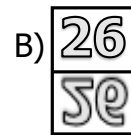
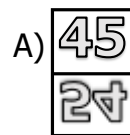
Yukarıdaki şeklin simetriği aşağıdakilerden hangisidir?



7) Yandaki şeklin simetriği aşağıdakilerden hangisidir?



8) Aşağıdaki sayılardan hangisinin simetriği yanlış verilmiştir?



9) Aşağıdakilerden hangisinin simetri doğrusu yanlış çizilmiştir?

