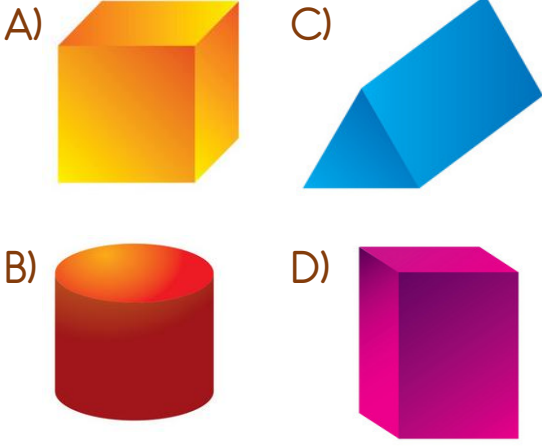



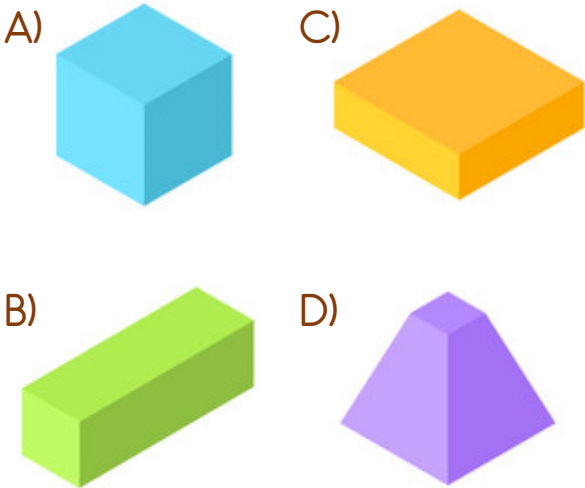
1) Aşağıdaki cisimlerden hangisi kullanılarak bir üçgen çizilebilir?



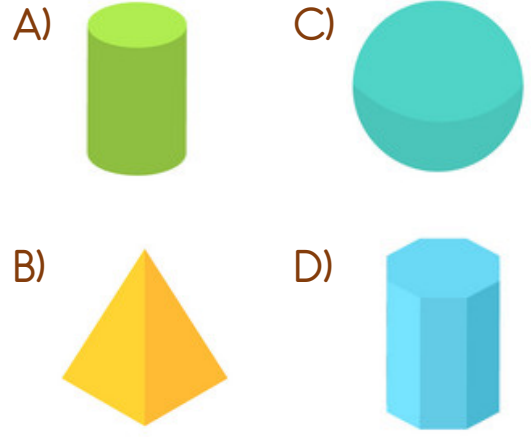
2)




Yukarıdaki karelerin kapatılması sonucunda hangi cisim oluşur?



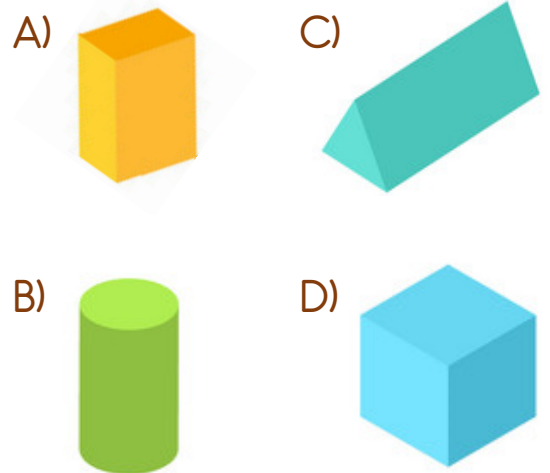
3) Aşağıdaki cisimlerden hangisi kullanılarak bir çember çizilebilir?



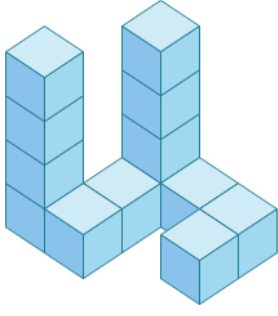
4)



Yukarıdaki evi çizmek için hangi cisme ihtiyacımız yoktur?



5)







Yukarıdaki yapıda kaç tane küp kullanılmıştır?

- A) 11 B) 12 C) 13 D) 14


6)



Yukarıdaki cisimlerin yukarıdan görünüşü hangisidir?

- A)  C)   
B)  D) 

7) Yandaki cismin kaç yüzeyi dikdörtgen şeklindedir?



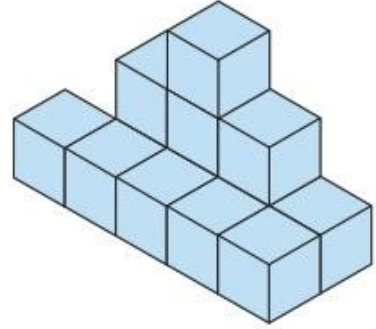
- A) 1 B) 2 C) 3 D) 4

8) Yandaki cismin yüzeyleri kullanılarak kaç farklı şekil çizilebilir?



- A) 1 B) 2 C) 3 D) 4

9)



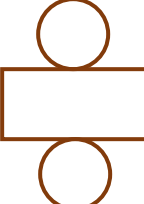
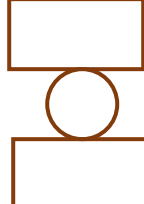


Yukarıdaki yapıda kaç tane küp kullanılmıştır?

- A) 10 B) 11 C) 12 D) 13

10) Yandaki cisim açıldığında hangi şekil oluşur?



- A)  C)   
B)  D) 

## Cevap Anahtarı

1-C 2-A 3-A 4-B 5-C 6-C 7-D 8-B 9-D 10-B