

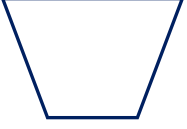


Adı Soyadı :

Numarası :

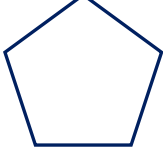
Konu: Dörtgen, Beşgen, Altıgen ve Sekizgen Ekinliği 3

Aşağıdaki geometrik şekillerin, kenar sayılarına göre isimlerini yazınız. Görselleri verilen nesnelere belirtilen sayılara göre kutulardaki sayılar bölümüne yazınız.



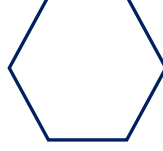
İsmi:

Sayılar:



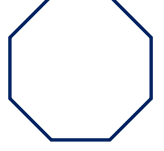
İsmi:

Sayılar:



İsmi:

Sayılar:



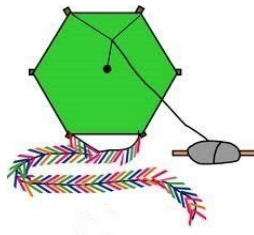
İsmi:

Sayılar:

1




2



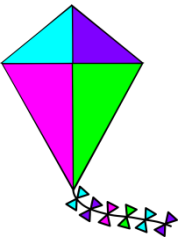
3



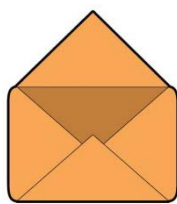
4



5



6



7



8



9




10




11



12



Aşağıdaki şekillerin kenar, köşe ve açılarını noktalı yerlere yazınız.

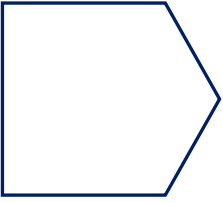


..... kenarı var.

..... köşesi var.

..... açısı var.

Adı:

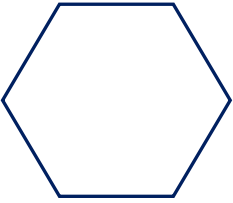


..... kenarı var.

..... köşesi var.

..... açısı var.

Adı:

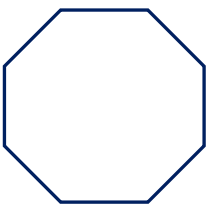


..... kenarı var.

..... köşesi var.

..... açısı var.

Adı:



..... kenarı var.


..... köşesi var.

..... açısı var.


Adı:

Aşağıdaki noktalı kağıtlara belirtilen şekilleri çizelim.


Sekizgen



Altıgen



Beşgen



Dörtgen

