

- 1) Yandaki cismin yüzeylerine alfabemizdeki harfler sırası ile birer tane yazılacaktır.



Buna göre cismin yüzeyine hangi harf yazılamaz?

- A) E B) B C) F D) Ç

- 2) Aşağıdaki cisimlerden hangisi ile geometrik bir şekil çizilemez?

A)



C)



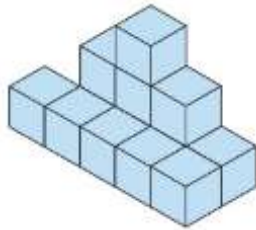
B)



D)

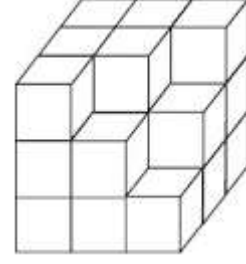


- 3) Yandaki yapıda kaç tane küp gözükmektedir?



- A) 8 B) 10 C) 13 D) 15

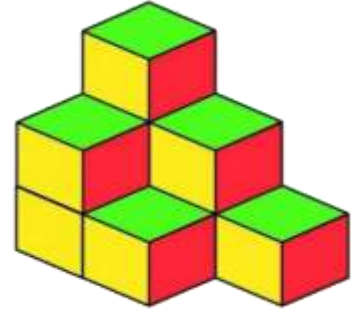
4)



Yukarıdaki küpün tamamlanması için kaç tane küçük küpe ihtiyaç vardır?

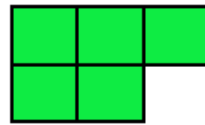
- A) 3 B) 4 C) 5 D) 6

5)

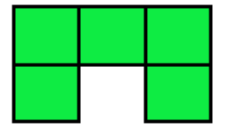


Yukarıdaki yapının yukarıdan görünüşü hangisidir?

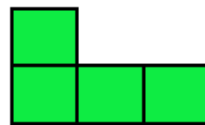
A)



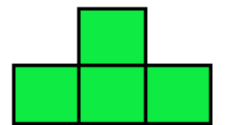
C)



B)

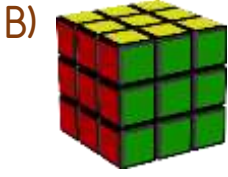


D)





Yukarıdaki cisimlerin her biri bir varlık ile eşleştirildiğinde hangi varlık boşa kalır?



7)



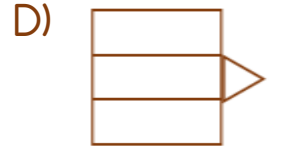
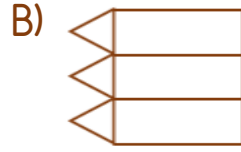
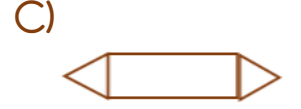
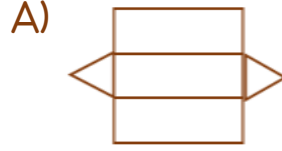
Yukarıdaki cisimlerin yukarıdan görünüşü hangisidir?




8)



Yukarıdaki cismi açtığımızda hangi şekil meydana gelir?



9) Yandaki yapıda kaç tane küp gözükmektedir?



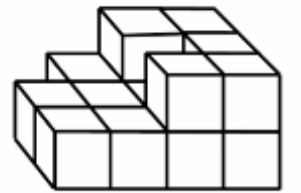
A) 10

B) 11

C) 12

D) 13

10) Yandaki yapıda kaç tane küp kullanılmıştır?



A) 9

B) 11

C) 13

D) 16

Cevap Anahtarı

1-C 2-D 3-B 4-B 5-A 6-C 7-B 8-A 9-C 10-D