

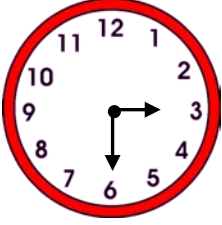


Adı Soyadı :

Numarası :

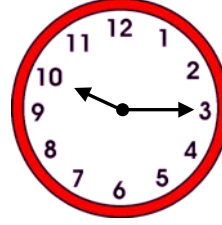
Konu: Zamanı Ölçme (Saatler) Etkinliği 5

Aşağıdaki saatlerin kaçı gösterdiklerini ve okunuşlarını örnekteki gibi yazınız.



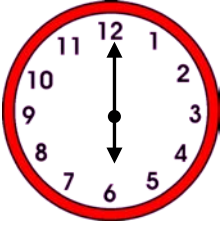
Saat: 03.00

Okunuşu: Üç buçuk




Saat:

Okunuşu:



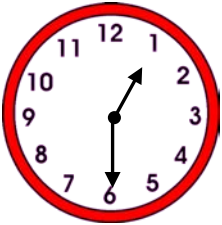
Saat:

Okunuşu:




Saat:

Okunuşu:



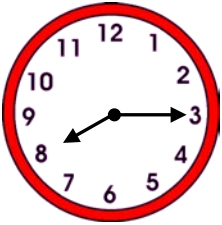
Saat:

Okunuşu:



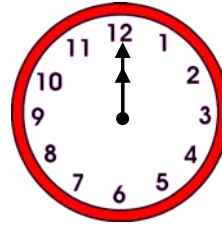
Saat:

Okunuşu:



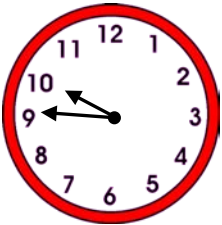
Saat:

Okunuşu:



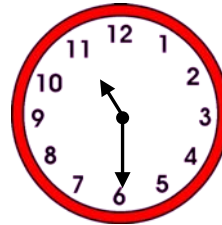
Saat:

Okunuşu:



Saat:

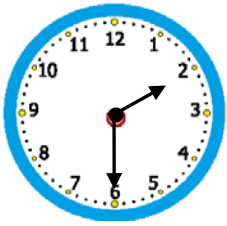
Okunuşu:



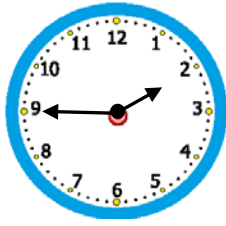
Saat:

Okunuşu:

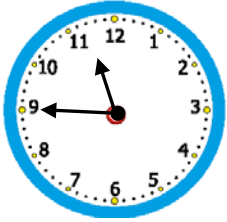
Aşağıdaki saatlerin öğleden önce okunuşunu
örnekteki gibi yazınız.



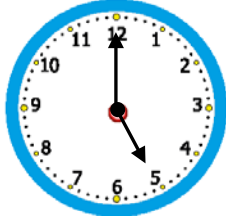
02 . 30



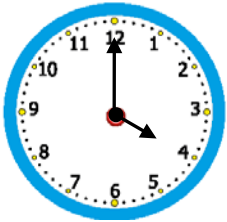
.....



.....



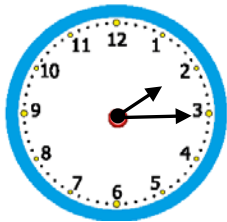
.....



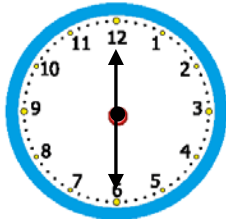
.....



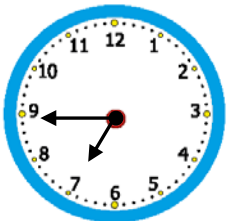
.....



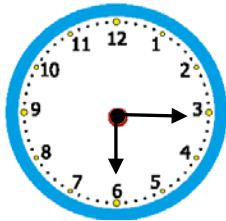
.....



.....




.....

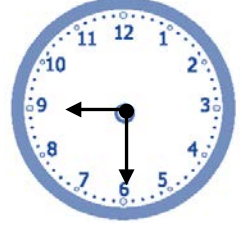


.....

Aşağıdaki saatlerin öğleden sonra okunuşunu
örnekteki gibi yazınız.



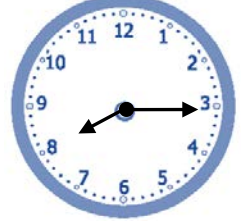
17 . 30



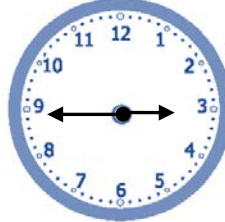
.....



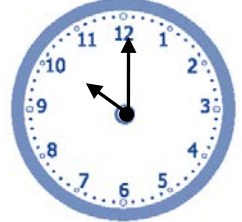
.....



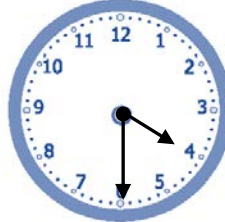
.....



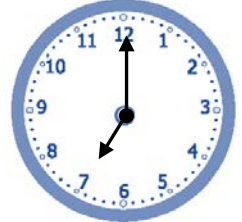
.....



.....



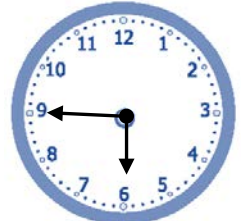
.....



.....

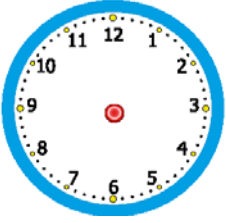


.....

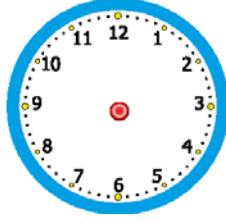


.....

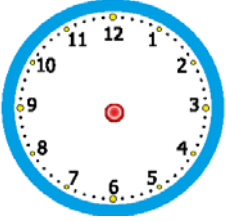
Aşağıdaki saatlerin akrep ve yelkovanlarını çizelim.



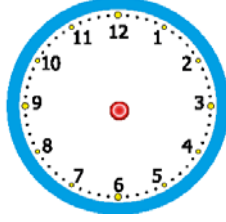
01.30



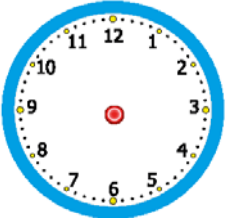
11.00



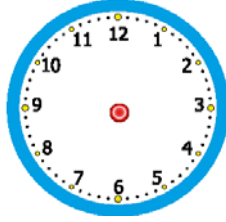
08.15



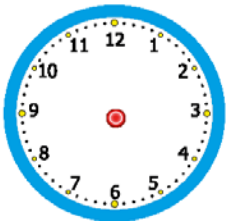
11.45



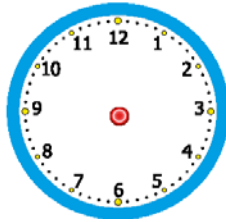
12.00



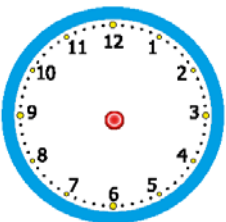
06.30



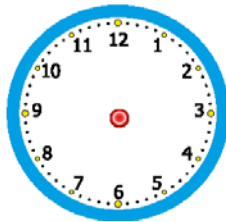
04.45



08.15



06.30



02.45

Aşağıdaki saatlerin akrep ve yelkovanlarını çizelim.



17.00



14.30



13.15



14.00



18.45



20.30



21.00



16.15

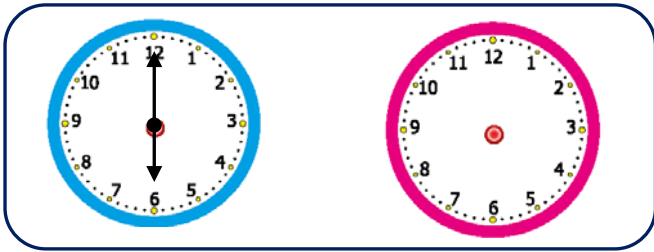
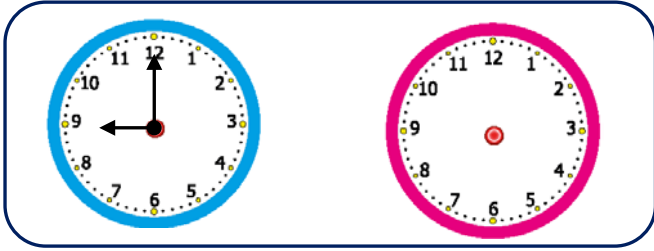
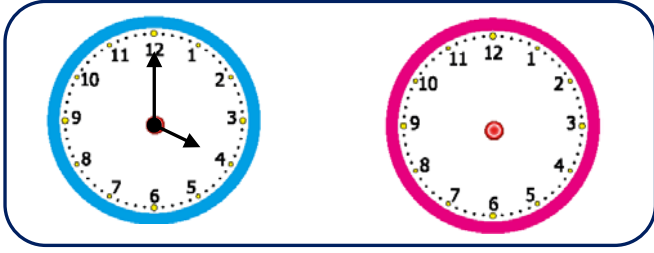


15.15

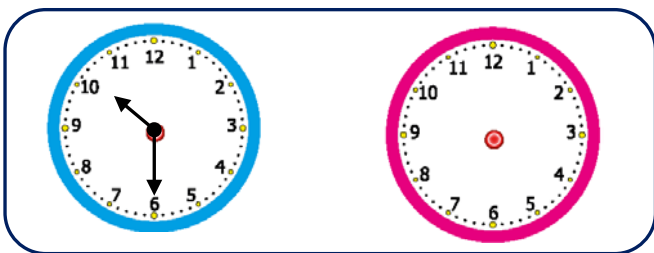
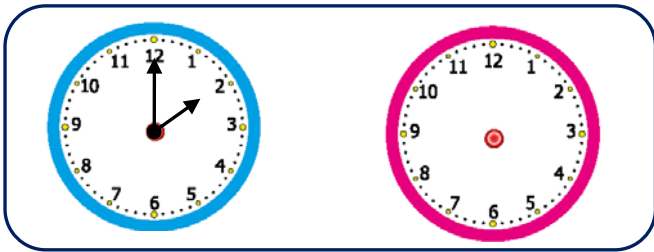
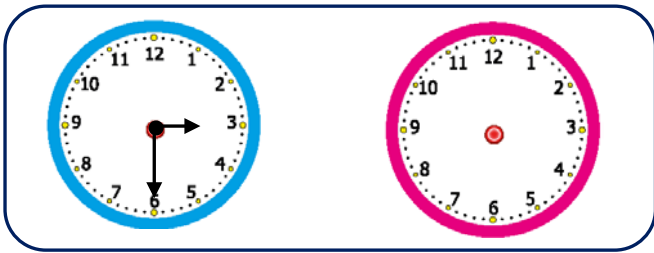


23.00

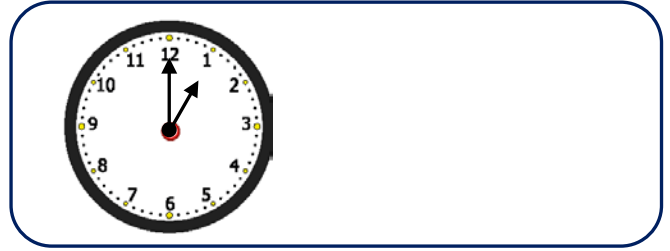
Aşağıdaki saatlerin belirttiği zamandan bir saat
öncesini saat modelleri üzerinde gösteriniz.



Aşağıdaki saatlerin belirttiği zamandan yarım
saat öncesini saat modelleri üzerinde gösteriniz.



Aşağıdaki saatlerin belirttiği zamandan yarım
saat sonrasını saat modelleri üzerinde gösteriniz.



Aşağıdaki saatlerin belirttiği zamandan çeyrek
saat sonrasını saat modelleri üzerinde gösteriniz.

