



Adı Soyadı : .....

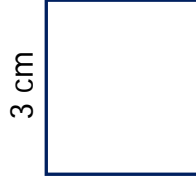
Numarası : .....

## Konu: Kare ve Dikdörtgenin Çevre Uzunlukları


Aşağıda kenar uzunluğu verilen karelerin çevre uzunluklarını örnekteki gibi bulunuz.




$$\text{Ç} = 4 \times 2 = 8 \text{ cm}$$

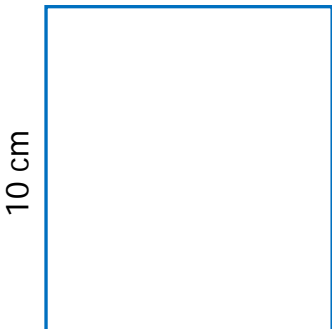


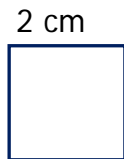
$$\text{Ç} : \dots\dots\dots$$


$$\text{Ç} : \dots\dots\dots$$


$$\text{Ç} : \dots\dots\dots$$


$$\text{Ç} : \dots\dots\dots$$


$$\text{Ç} : \dots\dots\dots$$


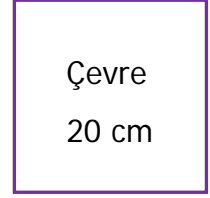
$$\text{Ç} : \dots\dots\dots$$


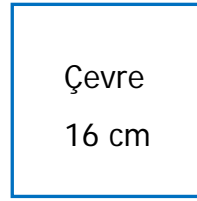
$$\text{Ç} : \dots\dots\dots$$

Aşağıda çevre uzunluğu verilen karelerin kenar uzunluklarını örnekteki gibi bulunuz.



$$\text{Ç} = 12 \div 4 = 3 \text{ cm}$$



$$\text{Ç} = \dots\dots\dots$$


$$\text{Ç} = \dots\dots\dots$$


$$\text{Ç} = \dots\dots\dots$$

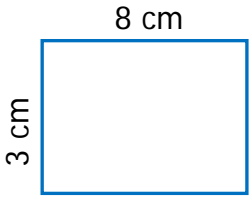

$$\text{Ç} = \dots\dots\dots$$


$$\text{Ç} = \dots\dots\dots$$


$$\text{Ç} = \dots\dots\dots$$

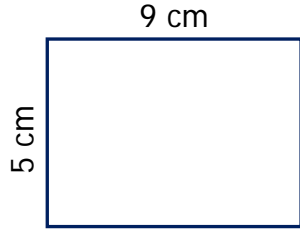

$$\text{Ç} = \dots\dots\dots$$

Aşağıda kenar uzunluğu verilen dikdörtgenlerin çevre uzunluklarını örnekteki gibi bulunuz.



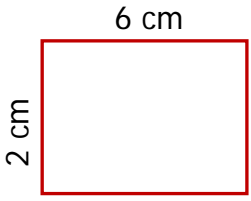
$$\text{Ç} = 8 + 3 = 11 \text{ cm}$$

$$11 \times 2 = 22 \text{ cm}$$



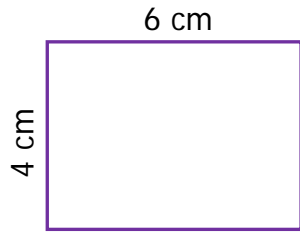
$$\text{Ç} = \dots\dots\dots$$

$$\dots\dots\dots$$



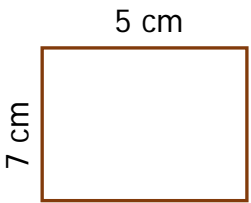
$$\text{Ç} = \dots\dots\dots$$

$$\dots\dots\dots$$



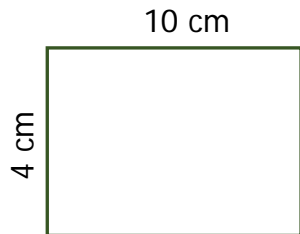
$$\text{Ç} = \dots\dots\dots$$

$$\dots\dots\dots$$



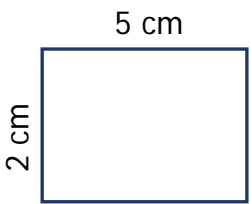
$$\text{Ç} = \dots\dots\dots$$

$$\dots\dots\dots$$



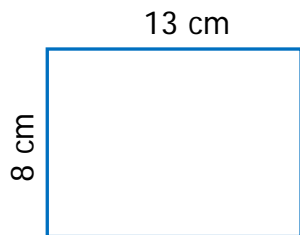
$$\text{Ç} = \dots\dots\dots$$

$$\dots\dots\dots$$



$$\text{Ç} = \dots\dots\dots$$

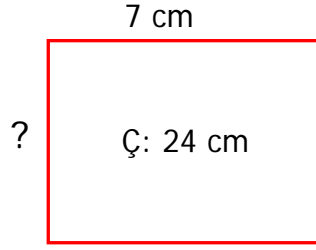
$$\dots\dots\dots$$



$$\text{Ç} = \dots\dots\dots$$

$$\dots\dots\dots$$

Aşağıda çevre uzunluğu verilen dikdörtgenlerin kenar uzunluklarını örnekteki gibi bulunuz.

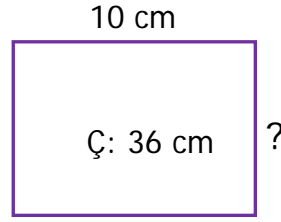


Çözüm

$$7 \times 2 = 14 \text{ cm}$$

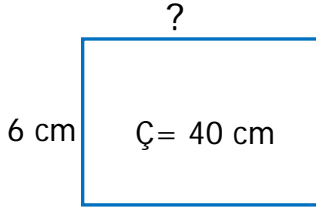
$$24 - 14 = 10 \text{ cm}$$

$$10 \div 2 = 5 \text{ cm}$$



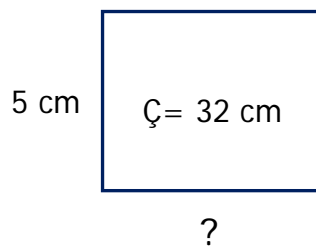
Çözüm

.....  
.....  
.....



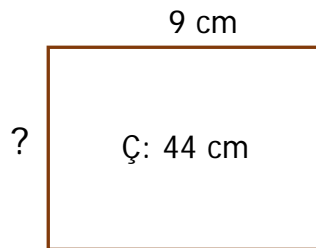
Çözüm

.....  
.....  
.....



Çözüm

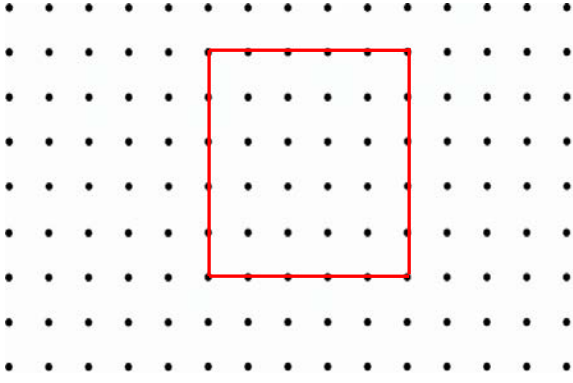
.....  
.....  
.....



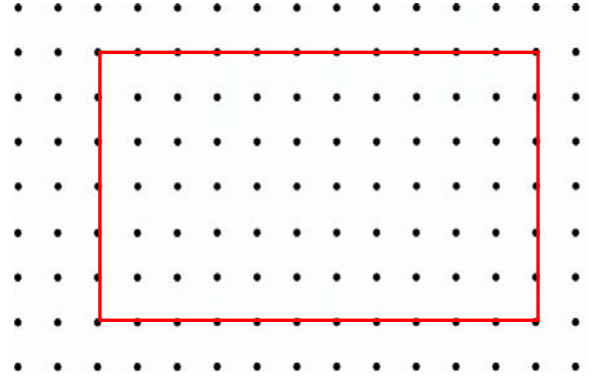
Çözüm

.....  
.....  
.....

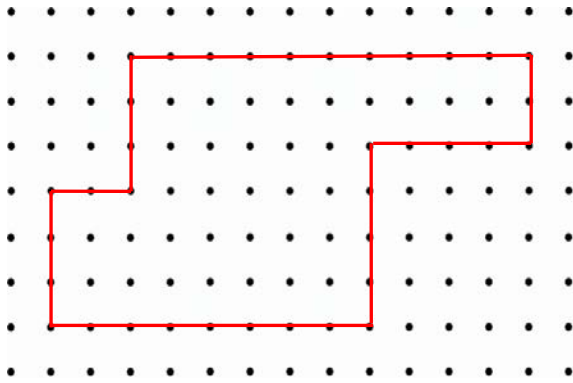
Aşağıda noktalı kağıtta verilen kare ve dikdörtgenin çevre uzunluklarının kaç birim olduklarını bulunuz. (İki nokta arası 1 birimdir.)



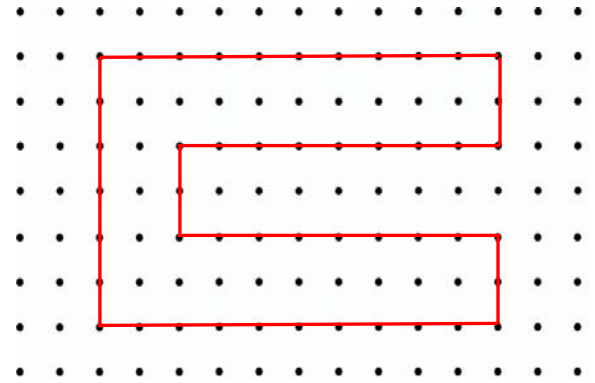
Ç: ..... birim



Ç: ..... birim

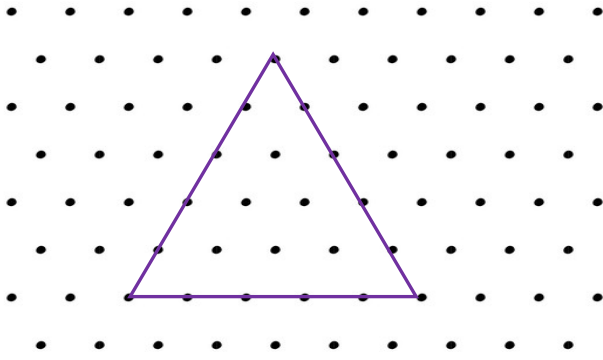


Ç: ..... birim

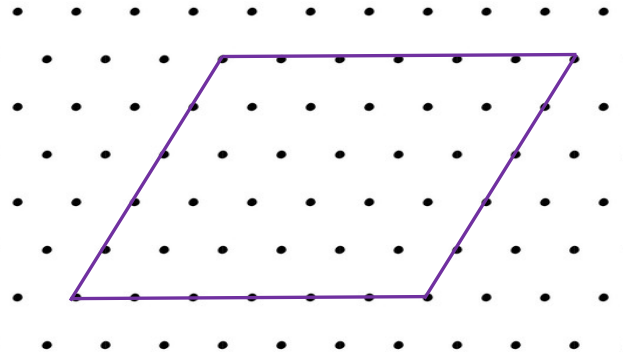


Ç: ..... birim

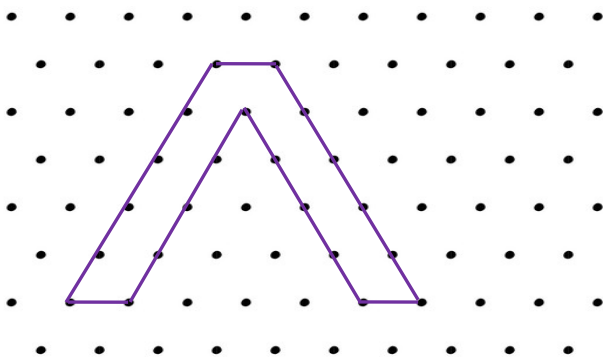
Aşağıda izometrik kağıtta verilen şekillerin çevre uzunluklarını bulunuz. (İki nokta arası 1 birimdir.)



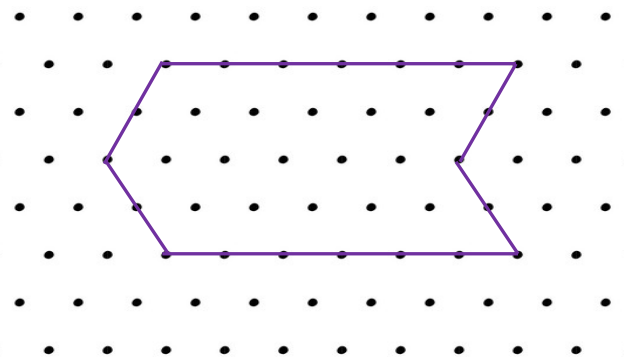
Ç: ..... birim



Ç: ..... birim

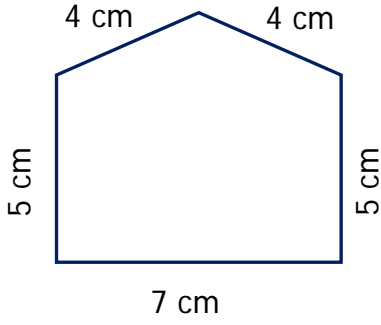


Ç: ..... birim

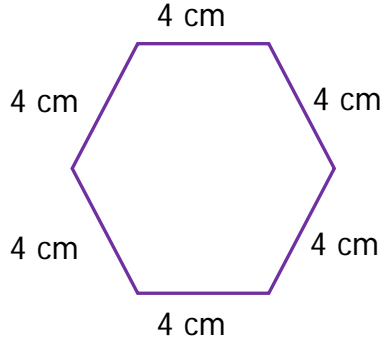


Ç: ..... birim

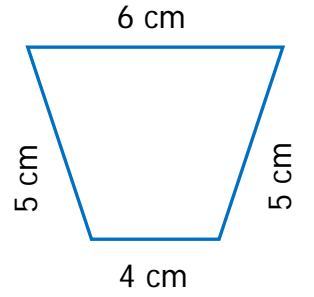
Aşağıda verilen düzlemsel şekillerin çevre uzunluklarını bulunuz.



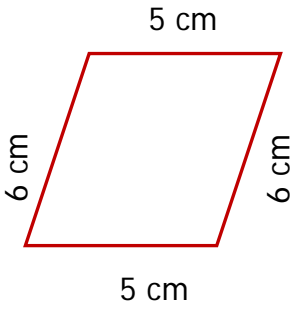
Ç = .....



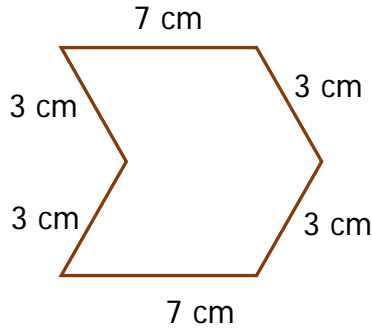
Ç = .....



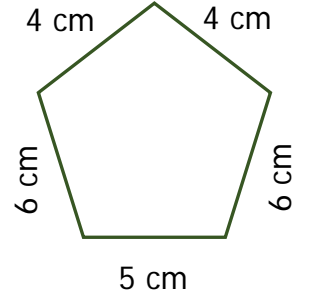
Ç = .....



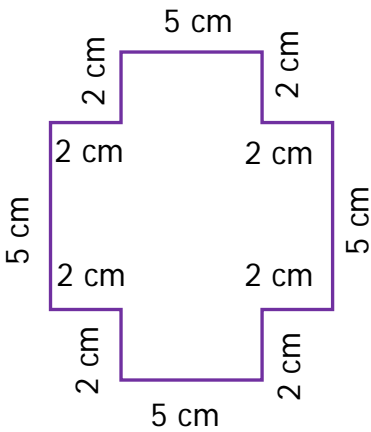
Ç = .....



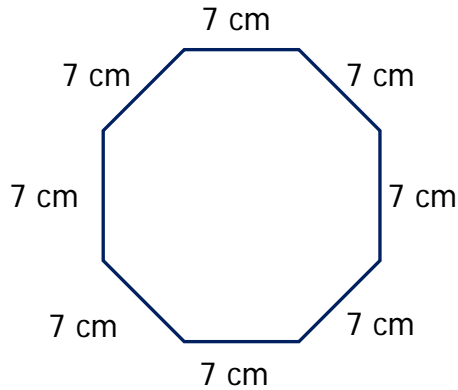
Ç = .....



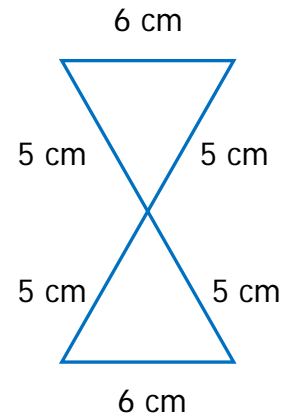
Ç = .....



Ç = .....



Ç = .....



Ç = .....