

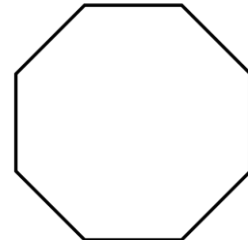
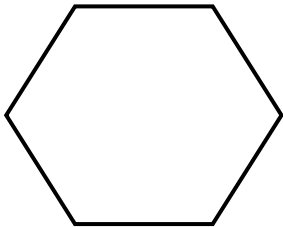



NOKTA

★ Aşağıdaki noktalardan doğru sembolle gösterilip isimlendirilenlerin altına "Doğru", yanlış isimlendirilenlere "Yanlış" yazalım.

5 • Beş noktası	• S S noktası	k • k noktası	△ • Üçgen noktası	B • B noktası
Y • Y noktası	• 9 9 noktası	okul • okul noktası	• D D noktası	t • t noktası

★ Aşağıdaki geometrik şekillerin kenarları üzerinde örnekteki gibi 4 tane koyup sembolle gösterip isimlendirelim






DOĞRU VE İŞİN

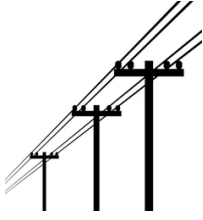
★ Aşağıdaki görselleri inceleyelim. Resimlerin altına "doğru" ve "ışın" kelimelerinden uygun olanını yazalım.

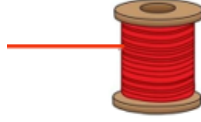














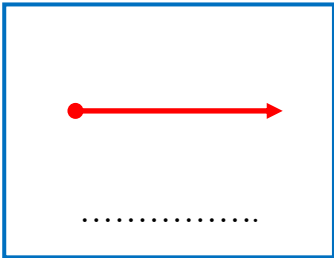


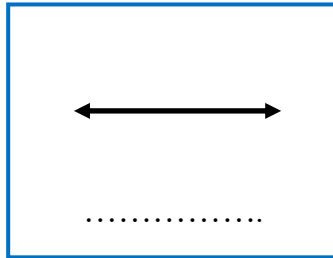


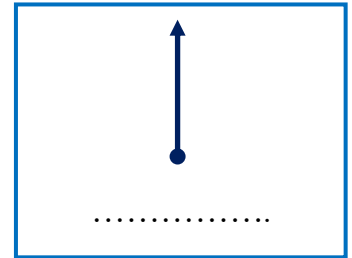


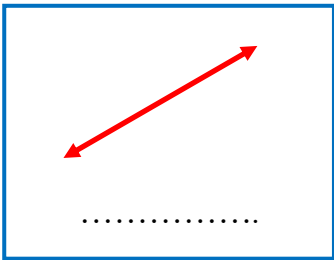


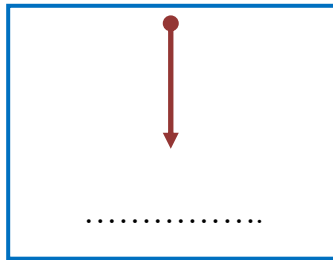
★ Aşağıdaki modellerin altına "doğru" ve "ışın" kelimelerinden uygun olanını yazalım.

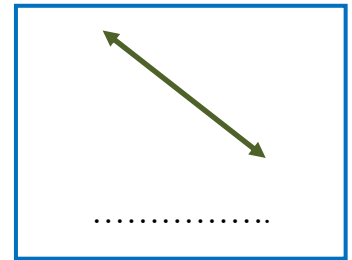











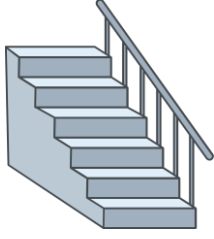




AÇI



Aşağıdaki varlıklardan açı oluşturanları işaretleyelim.



Aşağıdaki modellerden açı olanları işaretleyelim.

