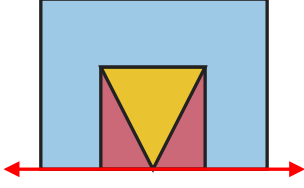
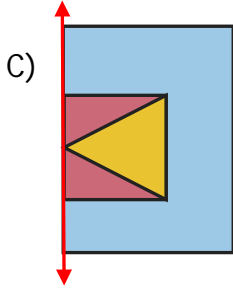
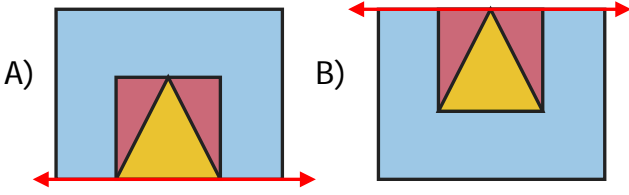


1)



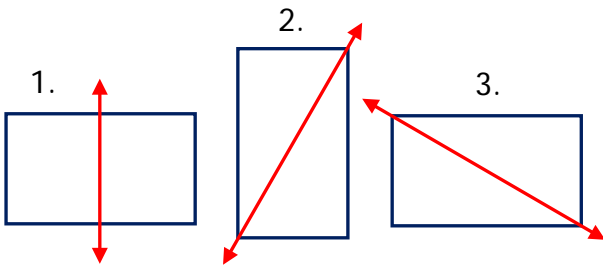
Yukarıdaki şeklin doğruya göre simetriği hangisidir?



2) Aşağıdaki rakamlardan hangisi simetriktir?

A) **8**      B) **6**      C) **4**

3)



Yukarıdaki kaç numaralı dikdörtgenlerin üzerindeki doğru simetri doğrusu değildir?

A) 1 ve 2      B) 1 ve 3      C) 2 ve 3

4) Yandaki görselin verilen doğruya göre simetriği aşağıdakilerden hangisidir?



A)



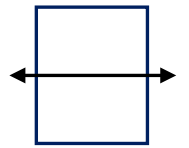
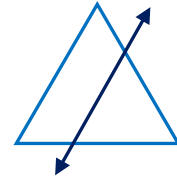
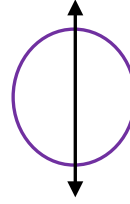
B)



C)



5)



Yukarıdaki şekillerden hangilerini simetri doğruları çizilmiştir?

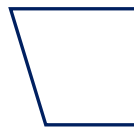
A) 1 ve 2

B) 1 ve 3

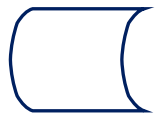
C) 2 ve 3

6) Aşağıdakilerden şekillerden hangisinin simetri doğrusu yoktur?

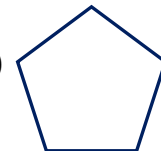
A)



B)



C)






7)

			1	2	3
			4	5	6
			7	8	9
			10	11	12

Yukarıdaki şeklin simetriğini oluşturmak için kaç numaralı kareler boyanmalıdır?

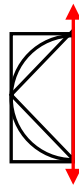
- A) 1, 5, 8, 10  
B) 3, 5, 8, 12  
C) 2, 5, 6, 11



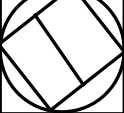
- 8)  Bazı şekillerin birden fazla simetri doğrusu vardır.  
 Simetri şekilleri ve nesneleri iki eş parçaya böler.  
 Her şeklin ve her nesnenin simetri doğrusu vardır.

Yukarıda simetri ile ilgili verilen bilgilerden hangileri doğrudur?

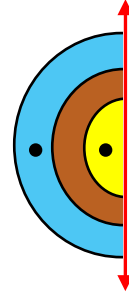
- A)   B)   C)   

- 9) Yandaki simetri doğrusuna göre şeklin tamamı çizilirse hangi şekil elde edilir?


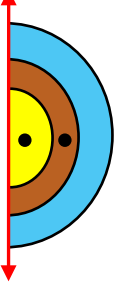
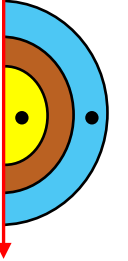


- A)  B)  C) 

10)



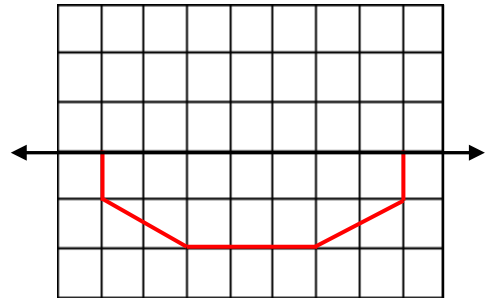
Yukarıdaki şeklin simetriği hangisidir?

- A)  B)   
C) 

- 11) Aşağıdaki harflerden hangisinin birden fazla simetri doğrusu vardır?

- A) **T** B) **H** C) **Y**

12)



Yukarıdaki şekil, simetri doğrusuna göre tamamlanırsa hangi geometrik şekil oluşur?

- A) Beşgen B) Altıgen C) Sekizgen

## CEVAP ANAHTARI

1) B

2) A

3) C

4) B

5) B

6) A

7) B

8) A

9) B

10) C

11) B

12) C

13)

14)

15)

16)

17)

18)

19)

20)