

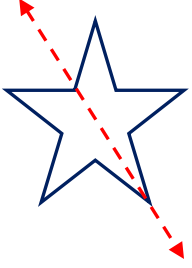


Adı Soyadı : .....

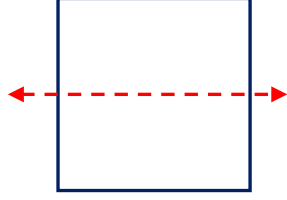
Numarası : .....

## Konu: Uzamsal İlişkiler (Simetri Etkinliği) 3


Aşağıdaki şekillerin verilen doğruya göre simetrik olup olmadığını işaretleyelim.



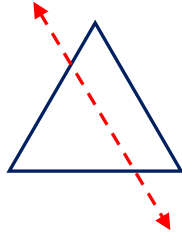
- simetrik  
 simetrik değil



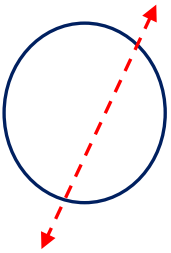
- simetrik  
 simetrik değil



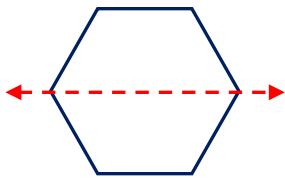
- simetrik  
 simetrik değil



- simetrik  
 simetrik değil





- simetrik  
 simetrik değil

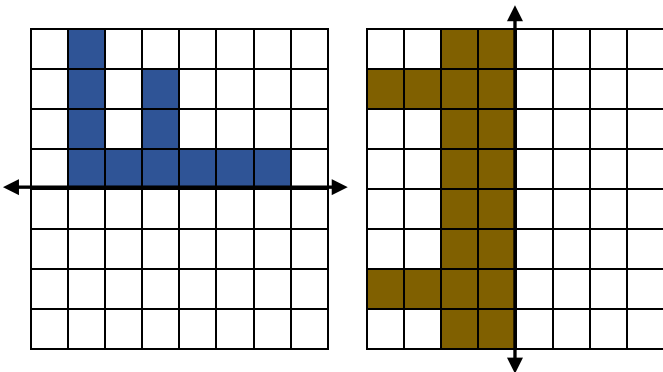
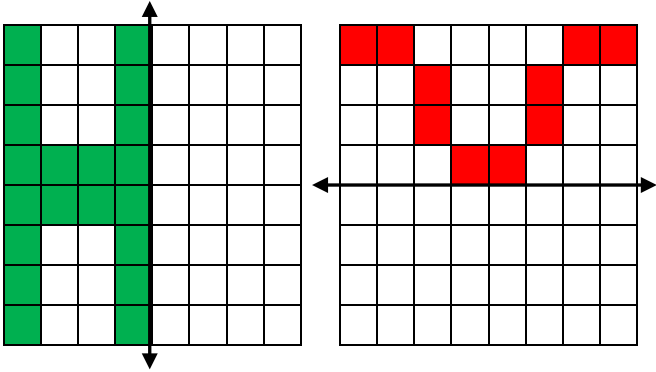
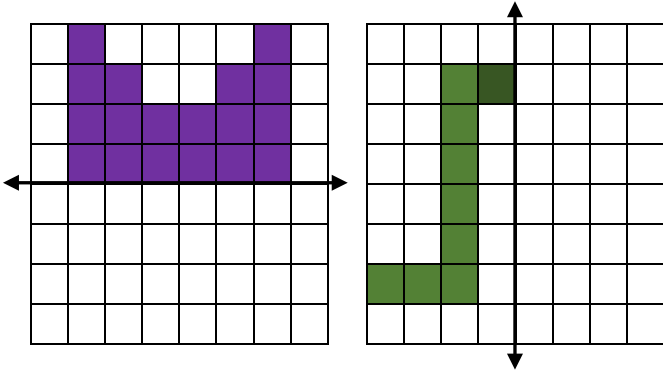
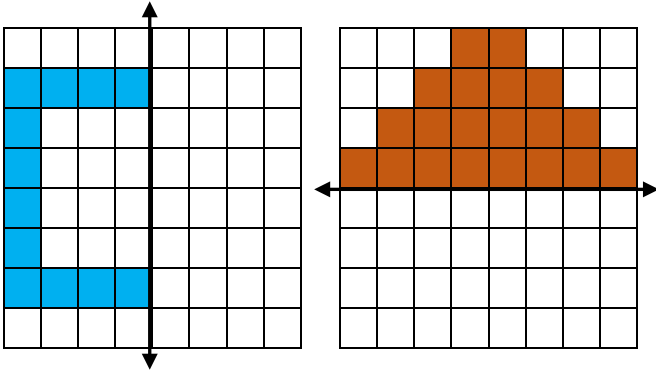


- simetrik  
 simetrik değil

Aşağıda verilen görsellere örnekteki gibi birer simetri doğrusu çizelim.



Aşağıda verilen şekilleri simetri doğrusuna göre tamamlayalım.



Aşağıdaki sözcüklerin doğruya göre simetriğini çiziniz.

