



NESNELERİN ÇEVRELERİ


☞ Aşağıdaki nesnelerle karşılık gelen çevreleri eşleştirelim.



A




B



C



Ç



D



E



F



G




Ğ



H



I



İ

