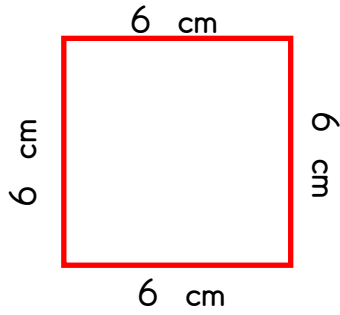


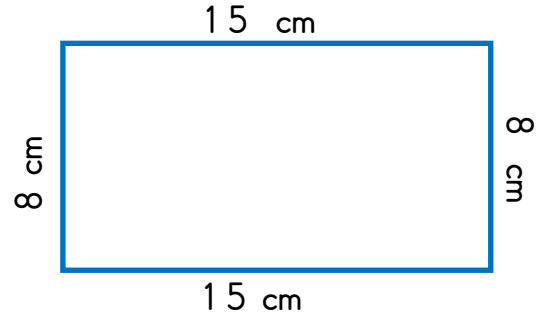


## ŞEKİLLERİN ÇEVRE UZUNLUKLARI

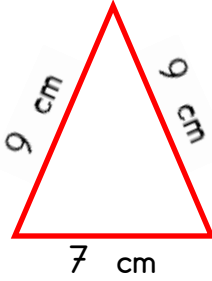
☞ Aşağıdaki geometrik şekilleri inceleyelim. Şekillerin çevre uzunluklarını bulup yazalım.



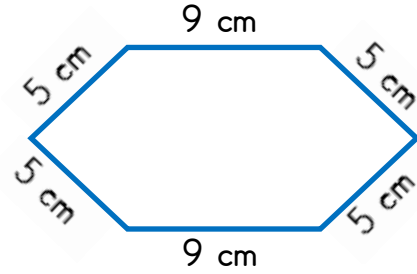
Karenin çevresi ..... cm'dir.



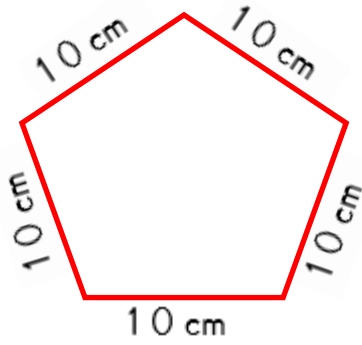
Dikdörtgenin çevresi ..... cm'dir.



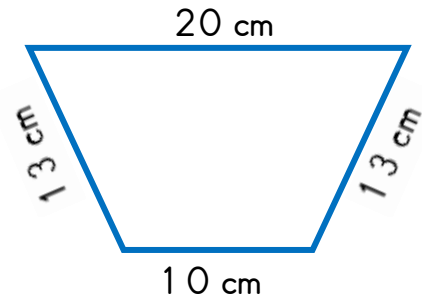
Üçgenin çevresi ..... cm'dir.



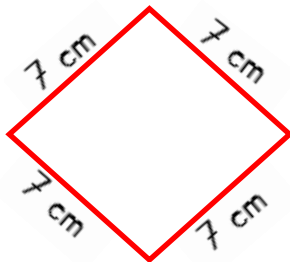
Altıgenin çevresi ..... cm'dir.



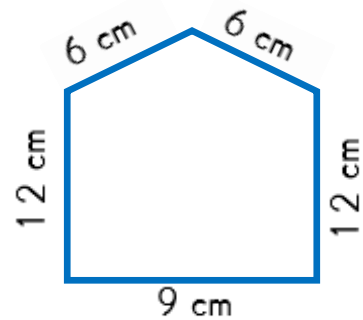

Beşgenin çevresi ..... cm'dir.



Dörtgenin çevresi ..... cm'dir.



Dörtgenin çevresi ..... cm'dir.



Beşgenin çevresi ..... cm'dir.