
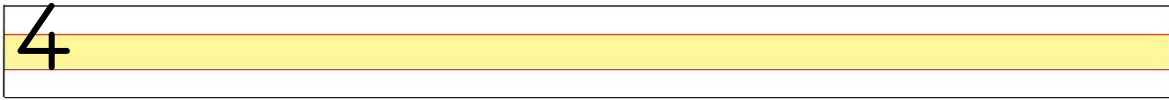

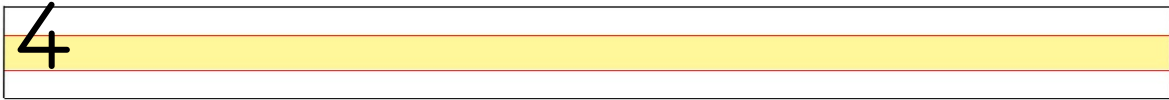
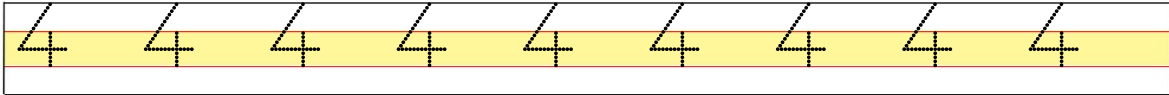
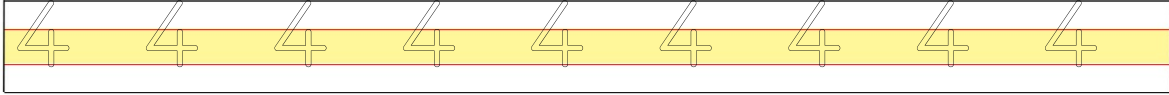


DOĞAL SAYILAR

1	2	3	4	5	6	7	8	9	0
---	---	---	---	---	---	---	---	---	---



Aşağıdaki satırlara verilen rakamı yazınız.



Ağaçtaki limonlardan dört tanesini boyayalım.



Aşağıdaki sayılardan üç rakamlarını yuvarlak içine alınız.

$$4 \quad 5 \quad \triangle = \square$$

6 4