


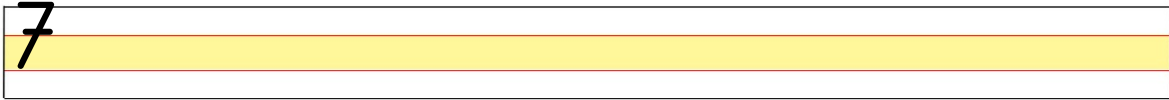
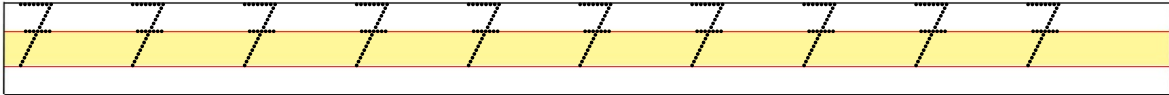
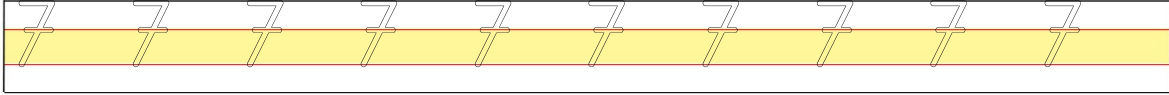


DOĞAL SAYILAR

1	2	3	4	5	6	7	8	9	0
---	---	---	---	---	---	---	---	---	---



Aşağıdaki satırlara verilen rakamı yazınız.



Verilen varlıkların sayısını bulalım. Rakamın yazıldığı kutucuğu boyayalım.

