

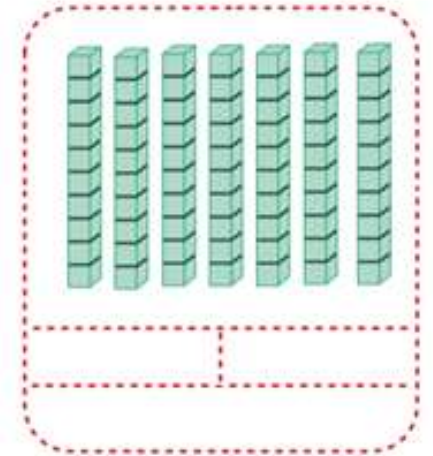
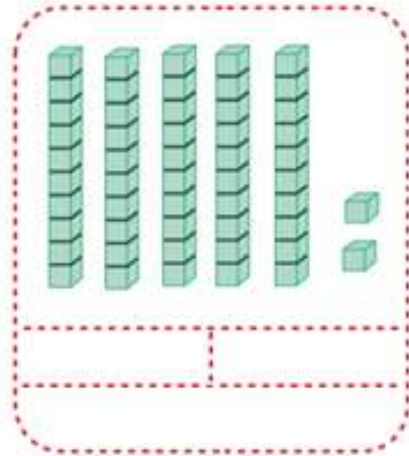
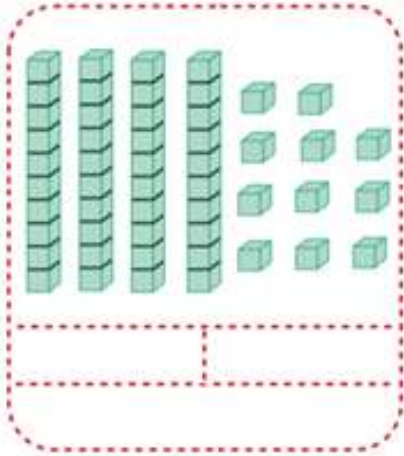
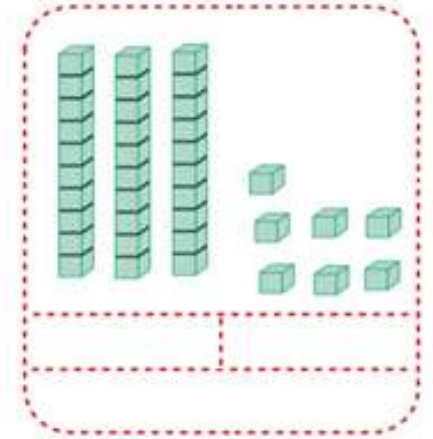
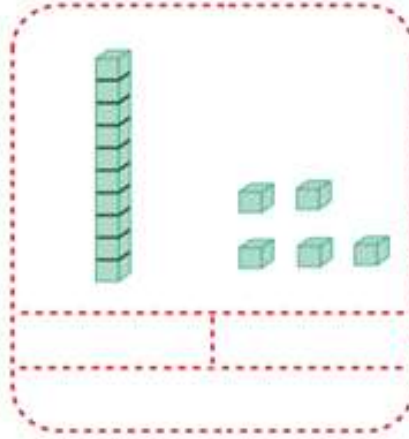
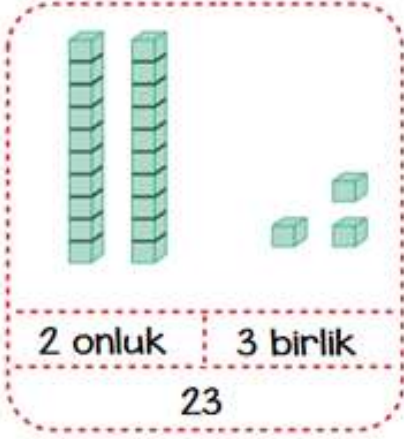
Adı :
Soyadı :
Sınıfı :

Matematik-2

Onluk ve Birliklere Ayırılım



Aşağıda verilen blokların sayılarını örnekteki gibi bulalım.



Onluk ve birlikleri verilen sayıları örnekteki gibi yazalım.

2 onluk 7 birlik → 27

5 onluk 6 birlik →

6 onluk 0 birlik →

4 onluk 9 birlik →

9 onluk 9 birlik →

7 onluk 3 birlik →

1 onluk 8 birlik →

3 onluk 6 birlik →

8 onluk 8 birlik →

4 onluk 0 birlik →