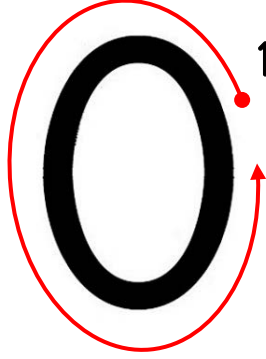


DOĞAL SAYILAR

1	2	3	4	5	6	7	8	9	0
---	---	---	---	---	---	---	---	---	---



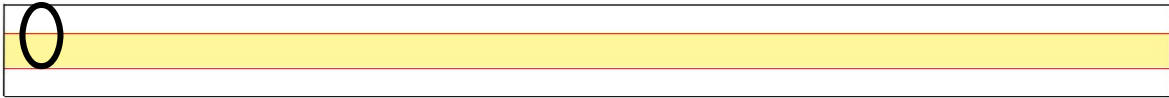
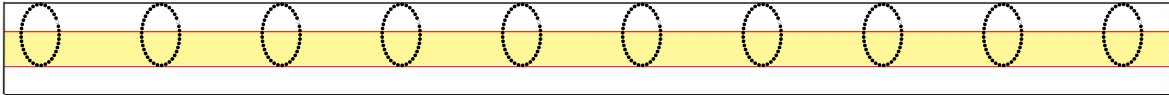
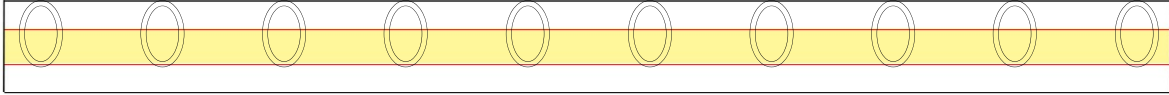
Saksıda hiç
çiçek yok.



Fanusta hiç
balık yok.



Aşağıdaki satırlara verilen rakamı yazınız.



Meyve sepetinde verilen meyvelerin kaçar tane olduğunu eşleştirelim.



2
0
4
2