

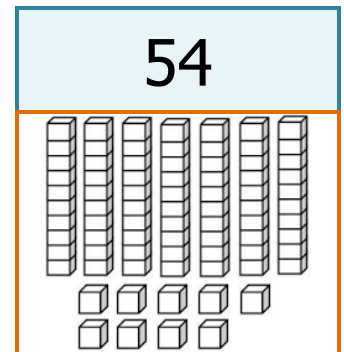
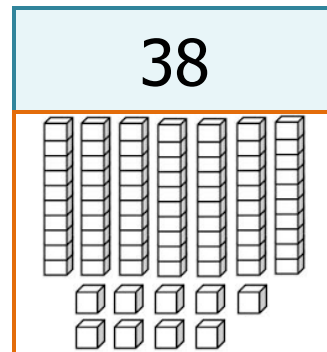
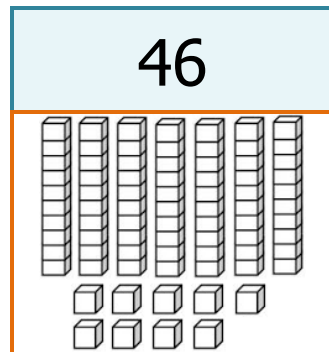
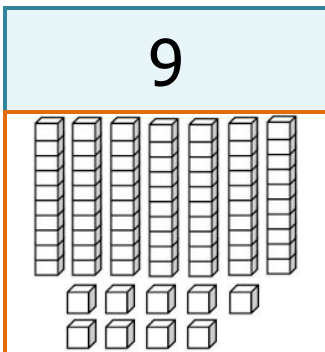
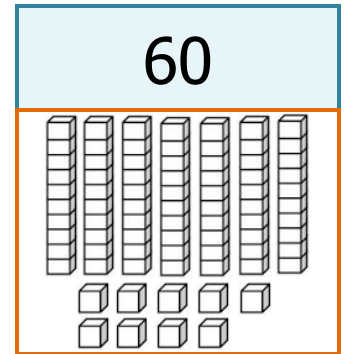
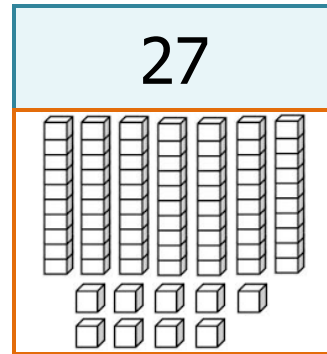
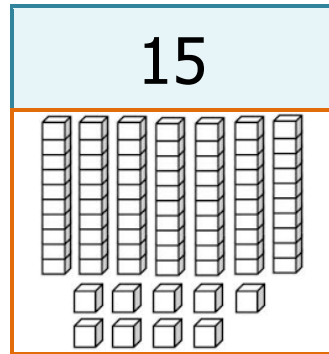
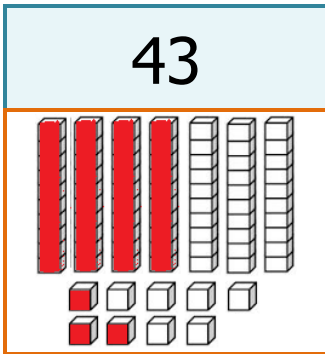
# 2. Sınıf Matematik 1-2. Hafta

✚ Aşağıdaki etkinliklerde **istenilen** bilgileri yazınız.

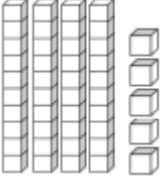
OKUNUŞLARINI YAZ		
14	→	
30	→	
93	→	
5	→	
76	→	
80	→	
42	→	
61	→	

SAYIYI YAZ		
Altmış dört	→	
Doksan dokuz	→	
Elli	→	
Kırk bir	→	
Yirmi yedi	→	
Seksen iki	→	
On altı	→	
Otuz sekiz	→	

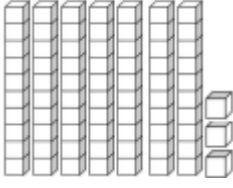
✚ Verilen sayılara göre, örnekteki gibi **onluk ve birlik** bloklarını boyayınız.



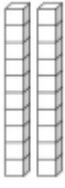
✚ Verilen **bloklara** göre, doğru **sayıyı** boyayınız.



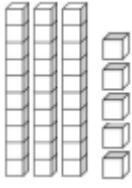
44	45	55
----	----	----



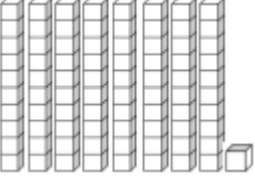
37	77	73
----	----	----




22	2	20
----	---	----



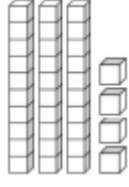
35	33	53
----	----	----



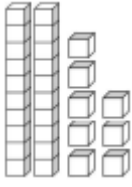
80	8	81
----	---	----



11	6	60
----	---	----



43	44	34
----	----	----



40	28	82
----	----	----

✚ Sayıların **basamak değerlerini** doğru gösteren kutuyu **yeşile** boyayınız.

28		
20 + 8	80 + 2	2 + 8

45		
4 + 5	40 + 5	50 + 4

90		
9	90	10 + 9

52		
20 + 5	5 + 2	50 + 2

13		
10 + 3	1 + 3	30 + 1

76		
7 + 6	70 + 6	60 + 7

✚ Varlıkların altına sayılarına göre **deste** veya **düzine** yazınız.

