



Adı Soyadı :

Numarası :

Konu: Nesneleri Sayalım 1

Varlıkları birer ritmik sayınız. Noktalı yerlere varlık sayılarını yazınız.



Tavuk tane yumurta yapmıştır.




Sincap tane fındık toplamıştır.



Tırtıl tane yaprak yemiştir.



Tavşan tane havuç yemiştir.

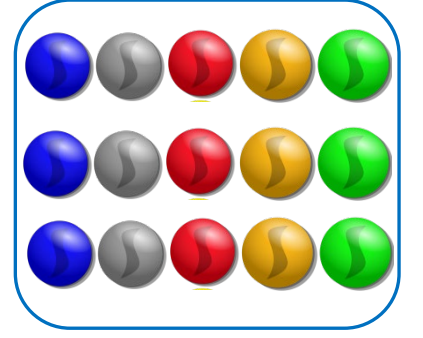


Kovandan tane arı kaçmıştır.

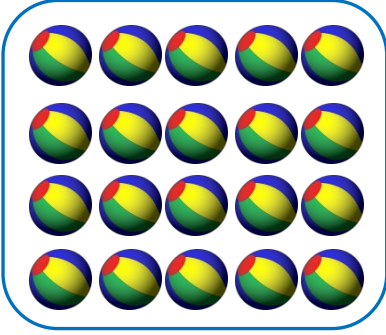
Varlık gruplarını, sayılarını gösteren rakamlarla örnekteki gibi eşleştirelim.




5



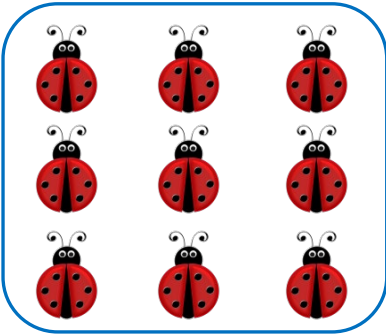
10




7




13



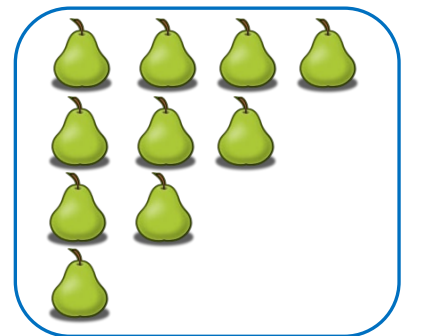
9



11



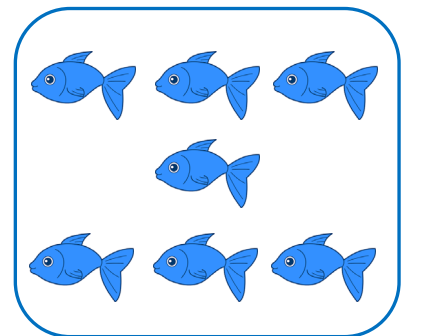
6



20



4



15