



Adı Soyadı :

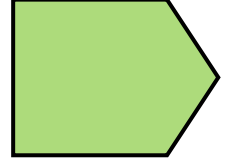
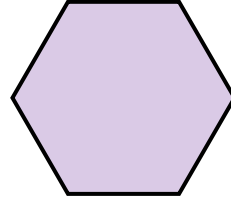
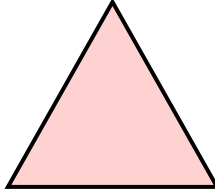


Numarası :

Çalışma Kağıdı 1







Konu : Simetri

Kazanım 1: Düzlemsel şekillerdeki simetri doğrularını belirler ve çizer.

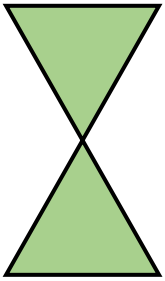
1 Aşağıdaki şekillerin simetri doğrularını çiziniz.



2 Aşağıdaki harflerin simetrik olanlarının simetri doğrularını çiziniz.



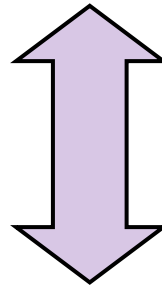
3 Aşağıdaki şekillerin tüm simetri doğrularını çiziniz. Her şeklin kaç tane simetri doğrusu olduğunu belirtiniz?




..... tane



..... tane

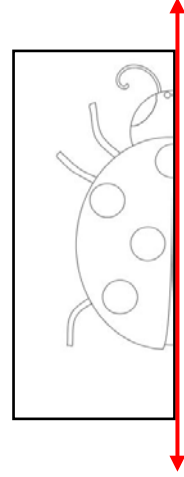
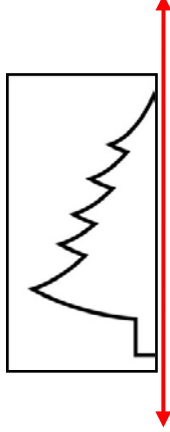
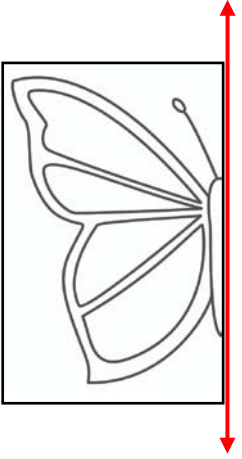





..... tane



..... tane

4 Aşağıda verilen şekillerin simetrilerini çizelim.



4 Aşağıdaki varlıklardan simetrik olanları işaretleyiniz.

