

ÇOKLUKLARIN NESNE SAYILARI 3


Aşağıda görseli verilen çokluklarla ifade edilen sayıları eşleştiriniz.



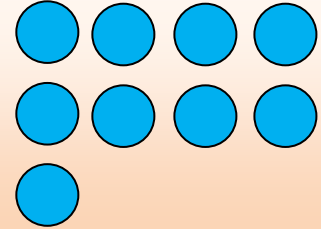
5




9



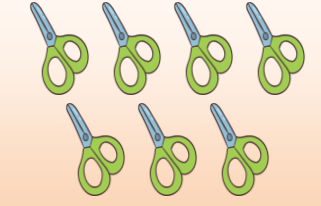
3




12




6



14




2



8



15



7

ÇOKLUKLARIN NESNE SAYILARI 4


Aşağıda görseli verilen çokluklarla ifade edilen sayıları eşleştiriniz.




7



19



5




13



0



11




2



8

17



4