



Adı Soyadı :

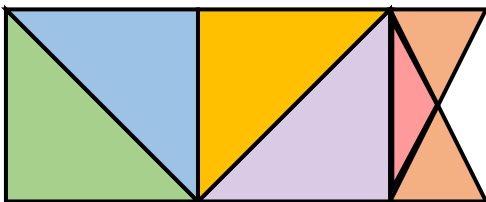
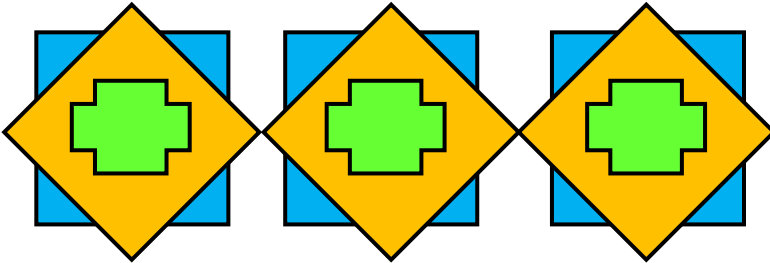


Numarası :

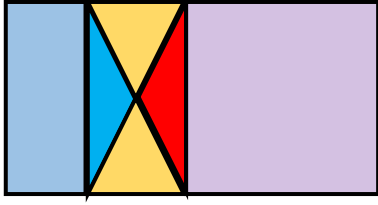
Çalışma Kağıdı

Konu : Örüntü ve Süslemeler

Kazanım 1: Uygun karesel, dikdörtgenel ve üçgenel bölgeleri kullanarak ve boşluk kalmayacak şekilde döşeyerek süsleme yapar.

- 1 Aşağıdaki örüntü ve süslemelerin hangi kurala göre oluşturduğunu bulunuz. Daha sonra gelen şekli çiziniz.



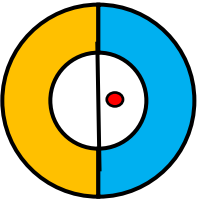


2 Yukarıdaki örüntü modelinde aşağıdakilerden hangisi yoktur?

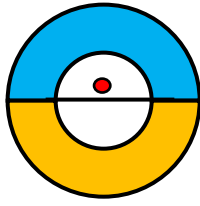
- A) Üçgen B) Dikdörtgen C) Kare D) Beşgen

3 Aşağıdaki örüntüde hangisi farklıdır?

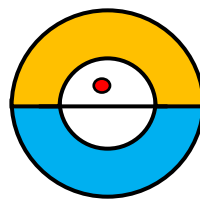
A)



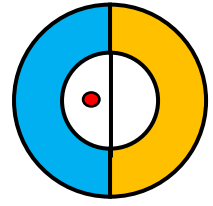
B)



C)

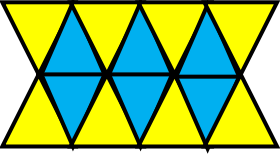


D)

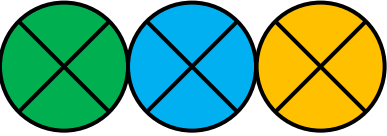


4 Aşağıdaki süslemelerin hangisinin tamamı üçgenlerden oluşmuştur?


a)



b)



c)



d)

