










ÇOKLUKLARIN NESNE SAYILARI 5

Aşağıda gruplarda verilen varlıkları sayalım. Varlıkların sayılarını rakamla aşağıda verilen yazma alanına yazalım



ÇOKLUKLARIN NESNE SAYILARI 6

Aşağıda gruplarda verilen varlıkları sayalım. Varlıkların sayılarını rakamla aşağıda verilen yazma alanına yazalım






Blank writing area with a dashed line for the number.

Blank writing area with a dashed line for the number.

Blank writing area with a dashed line for the number.

Blank writing area with a dashed line for the number.






Blank writing area with a dashed line for the number.

Blank writing area with a dashed line for the number.

Blank writing area with a dashed line for the number.

Blank writing area with a dashed line for the number.



Blank writing area with a dashed line for the number.

Blank writing area with a dashed line for the number.

Blank writing area with a dashed line for the number.

Blank writing area with a dashed line for the number.