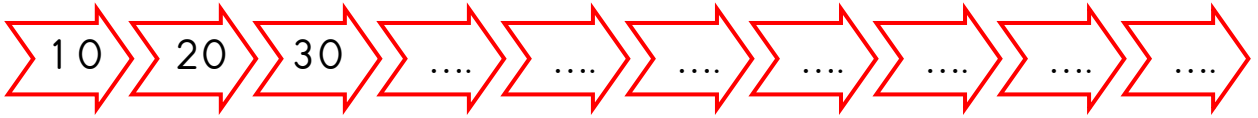
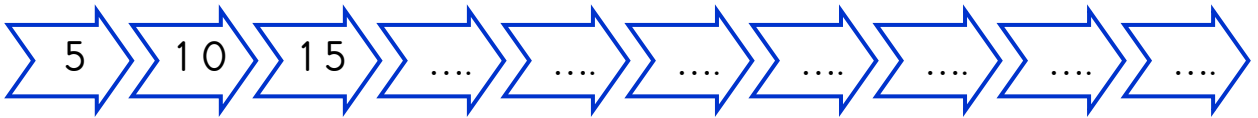
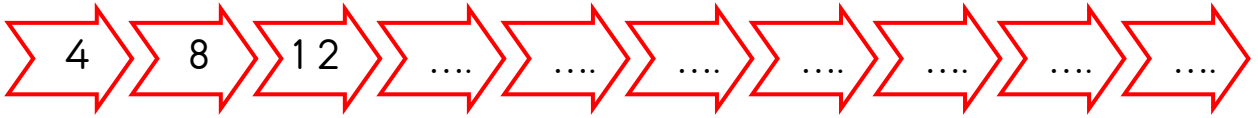
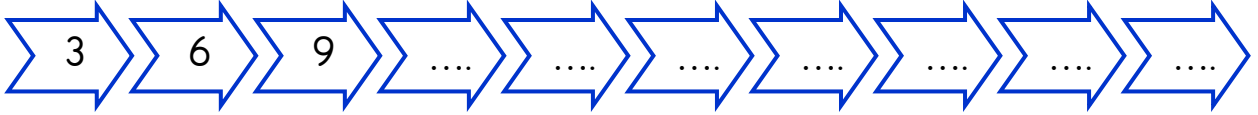

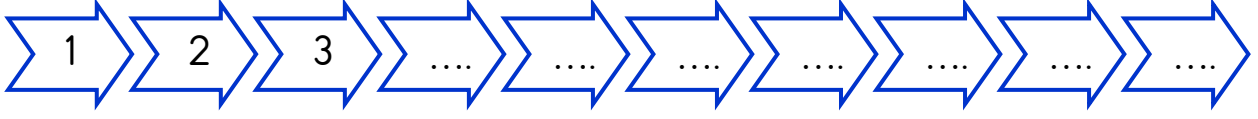




ÇARPMA İŞLEMİ

★ Aşağıda ritmik sayılardaki noktalı yerleri doldurunuz.



★ Aşağıdaki çarpım tablolarını doldurunuz.

1 x 2	2 x 2	3 x 2	4 x 2	5 x 2	6 x 2	7 x 2	8 x 2	9 x 2	10 x 2
2

1 x 3	2 x 3	3 x 3	4 x 3	5 x 3	6 x 3	7 x 3	8 x 3	9 x 3	10 x 3
3

1 x 4	2 x 4	3 x 4	4 x 4	5 x 4	6 x 4	7 x 4	8 x 4	9 x 4	10 x 4
4

1 x 5	2 x 5	3 x 5	4 x 5	5 x 5	6 x 5	7 x 5	8 x 5	9 x 5	10 x 5
5