




ONLUK BİRLİK ÇALIŞMASI 5



- Aşağıda verilen şekilleri onluk birlik olarak gruptandırarak tabloya yazınız. İskender07




Onluk	Birlik
Sayı:	



Onluk	Birlik
Sayı:	




Onluk	Birlik
Sayı:	



Onluk	Birlik
Sayı:	



Onluk	Birlik
Sayı:	



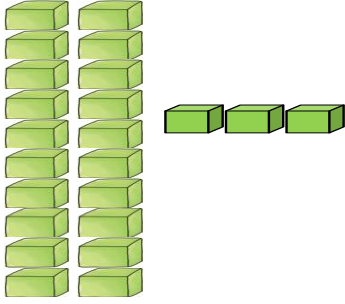
Onluk	Birlik
Sayı:	



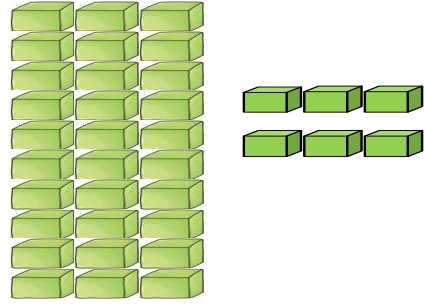
1.SINIF MATEMATİK ONLUK BİRLİK ÇALIŞMASI 6



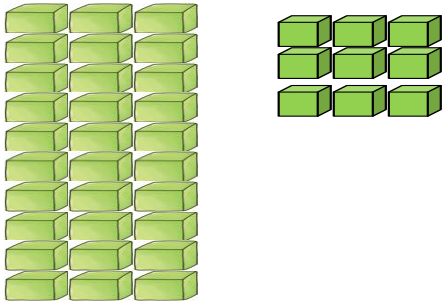
Aşağıda verilen onluk birlik modellerini tabloya uygun doldurunuz.



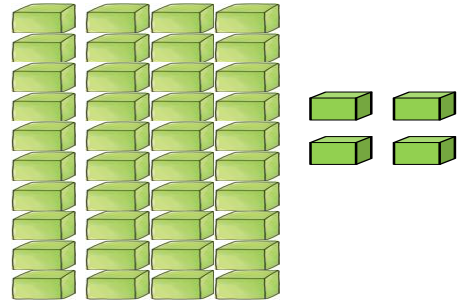
Onluk	Birlik
Sayı:	




Onluk	Birlik
Sayı:	




Onluk	Birlik
Sayı:	



Onluk	Birlik
Sayı:	



Onluk	Birlik
Sayı:	



Onluk	Birlik
Sayı:	