



# ÇIKARMA İŞLEMİ ÇALIŞMASI 1



- Aşağıda verilen çıkarma işlemi inceleyiniz. Verilen örneğe uygun olacak şekilde soruları cevaplayınız.



$$\dots 4 \dots - \dots 1 \dots = \dots 3 \dots$$

$$\begin{array}{r} 4 \\ - 1 \\ \hline 3 \end{array}$$



$$\dots - \dots = \dots$$

$$\begin{array}{r} \dots \\ - \dots \\ \hline \dots \end{array}$$




$$\dots - \dots = \dots$$

$$\begin{array}{r} \dots \\ - \dots \\ \hline \dots \end{array}$$



$$\dots - \dots = \dots$$

$$\begin{array}{r} \dots \\ - \dots \\ \hline \dots \end{array}$$




$$\dots - \dots = \dots$$

$$\begin{array}{r} \dots \\ - \dots \\ \hline \dots \end{array}$$



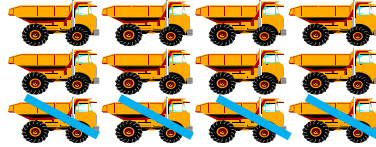
$$\dots - \dots = \dots$$

$$\begin{array}{r} \dots \\ - \dots \\ \hline \dots \end{array}$$




$$\dots - \dots = \dots$$

$$\begin{array}{r} \dots \\ - \dots \\ \hline \dots \end{array}$$



$$\dots - \dots = \dots$$

$$\begin{array}{r} \dots \\ - \dots \\ \hline \dots \end{array}$$



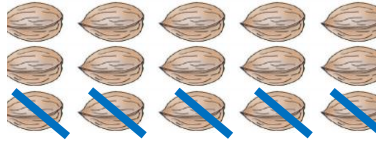
$$\dots - \dots = \dots$$

$$\begin{array}{r} \dots \\ - \dots \\ \hline \dots \end{array}$$




$$\dots - \dots = \dots$$

$$\begin{array}{r} \dots \\ - \dots \\ \hline \dots \end{array}$$



$$\dots - \dots = \dots$$

$$\begin{array}{r} \dots \\ - \dots \\ \hline \dots \end{array}$$



$$\dots - \dots = \dots$$


$$\begin{array}{r} \dots \\ - \dots \\ \hline \dots \end{array}$$




## ÇIKARMA İŞLEMİ ÇALIŞMASI 2



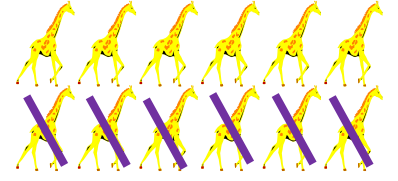
- Aşağıda verilen çıkarma işlemi inceleyiniz. Verilen örneğe uygun olacak şekilde soruları cevaplayınız.




$$\begin{array}{r} \dots 7 \dots \\ - \dots 3 \dots \\ \hline \dots 4 \dots \end{array}$$



$$\begin{array}{r} \dots \dots \\ - \dots \dots \\ \hline \dots \dots \end{array}$$




$$\begin{array}{r} \dots \dots \\ - \dots \dots \\ \hline \dots \dots \end{array}$$



$$\begin{array}{r} \dots \dots \\ - \dots \dots \\ \hline \dots \dots \end{array}$$




$$\begin{array}{r} \dots \dots \\ - \dots \dots \\ \hline \dots \dots \end{array}$$



$$\begin{array}{r} \dots \dots \\ - \dots \dots \\ \hline \dots \dots \end{array}$$




$$\begin{array}{r} \dots \dots \\ - \dots \dots \\ \hline \dots \dots \end{array}$$




$$\begin{array}{r} \dots \dots \\ - \dots \dots \\ \hline \dots \dots \end{array}$$




$$\begin{array}{r} \dots \dots \\ - \dots \dots \\ \hline \dots \dots \end{array}$$



$$\begin{array}{r} \dots \dots \\ - \dots \dots \\ \hline \dots \dots \end{array}$$



$$\begin{array}{r} \dots \dots \\ - \dots \dots \\ \hline \dots \dots \end{array}$$



$$\begin{array}{r} \dots \dots \\ - \dots \dots \\ \hline \dots \dots \end{array}$$