

# ÇOKLUKLARIN NESNE SAYILARI


Aşağıda görseli verilen çokluklarla ifade edilen sayıları eşleştiriniz.



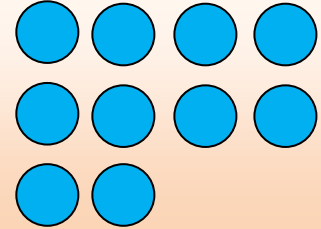
6




10



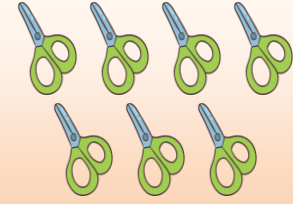
3




12




20



14




0



8



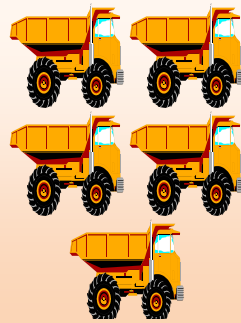





15



7

# ÇOKLUKLARIN NESNE SAYILARI

Aşağıda gruplarda verilen varlıkları sayalım. Varlıkların sayılarını rakamla aşağıda verilen yazma alanına yazalım

















































## RİTMİK SAYMALAR



Aşağıdaki birer ritmik saymalarda eksik bırakılan yere uygun olan sayıyı yazınız.

 1			 4	 5			
 9		 11				 15	
	 18				 22		

Aşağıdaki geriye doğru ritmik saymalarda eksik bırakılan yere uygun olan sayıyı yazınız.

 20			 17				 13		
	 9				 5				

Aşağıdaki ileriye doğru ikişer ritmik saymalarda eksik bırakılan yere uygun olan sayıyı yazınız.

 2			 8			 14			
--	---	---	--	---	---	--	---	---	---

Aşağıdaki geriye doğru ikişer ritmik saymalarda eksik bırakılan yere uygun olan sayıyı yazınız.

 20		 16			 10		 6		
--	---	---	---	---	---	--	--	---	---





## RİTMİK SAYMALAR




Aşağıdaki beşer ritmik saymalarda eksik bırakılan yere uygun olan sayıyı yazınız.



Aşağıdaki beşer ritmik saymalarda eksik bırakılan yere uygun olan sayıyı yazınız.



Aşağıdaki onar onar ritmik saymalarda eksik bırakılan yere uygun olan sayıyı yazınız.



Aşağıdaki onar onar ritmik saymalarda eksik bırakılan yere uygun olan sayıyı yazınız.






## ONLUK BİRLİK ÇALIŞMASI




- Aşağıda verilen şekilleri onluk birlik olarak gruptandırarak tabloya yazınız. İskender07




Onluk	Birlik
Sayı:	



Onluk	Birlik
Sayı:	




Onluk	Birlik
Sayı:	



Onluk	Birlik
Sayı:	



Onluk	Birlik
Sayı:	



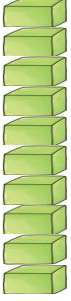
Onluk	Birlik
Sayı:	



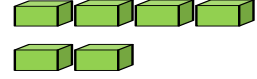
# 1. SINIF MATEMATİK ONLUK BİRLİK ÇALIŞMASI



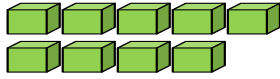
Aşağıda verilen onluk birlik modellerini tabloya uygun doldurunuz.



Onluk	Birlik
Sayı:	



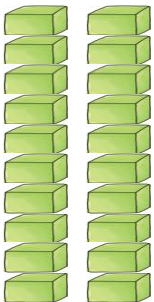
Onluk	Birlik
Sayı:	



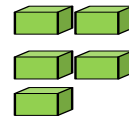
Onluk	Birlik
Sayı:	



Onluk	Birlik
Sayı:	



Onluk	Birlik
Sayı:	



Onluk	Birlik
Sayı:	



## ÇIKARMA İŞLEMİ ÇALIŞMASI



$$\begin{array}{r} 4 \\ - 2 \\ \hline \end{array}$$

$$\begin{array}{r} 5 \\ - 3 \\ \hline \end{array}$$

$$\begin{array}{r} 8 \\ - 4 \\ \hline \end{array}$$

$$\begin{array}{r} 7 \\ - 5 \\ \hline \end{array}$$

$$\begin{array}{r} 9 \\ - 2 \\ \hline \end{array}$$



$$\begin{array}{r} 12 \\ - 3 \\ \hline \end{array}$$

$$\begin{array}{r} 10 \\ - 4 \\ \hline \end{array}$$

$$\begin{array}{r} 14 \\ - 5 \\ \hline \end{array}$$

$$\begin{array}{r} 13 \\ - 3 \\ \hline \end{array}$$

$$\begin{array}{r} 15 \\ - 7 \\ \hline \end{array}$$



$$\begin{array}{r} 17 \\ - 9 \\ \hline \end{array}$$

$$\begin{array}{r} 20 \\ - 8 \\ \hline \end{array}$$

$$\begin{array}{r} 16 \\ - 0 \\ \hline \end{array}$$

$$\begin{array}{r} 18 \\ - 9 \\ \hline \end{array}$$

$$\begin{array}{r} 14 \\ - 10 \\ \hline \end{array}$$



# TOPLAMA İŞLEMİ ÇALIŞMASI

$3 + 2 =$

$4 + 3 =$

$6 + 5 =$

$8 + 2 =$

$10 + 4 =$

$5 + 5 =$



$9 + 6 =$


$10 + 0 =$

$11 + 4 =$

$4 + 15 =$

$8 + 9 =$

$8 + 2 =$



$9 + 9 =$

$7 + 7 =$

$9 + 3 =$

$14 + 4 =$

$13 + 7 =$

$6 + 9 =$

