



ZİHİNDEN TOPLAMA İŞLEMİ 1



- Aşağıda verilen toplama işlemlerini örnekte kullanılan yöntemle göre zihinden yapınız.

$8 + 5 = ?$

2 3

 $8 + 2 + 3$

10 + 3 = 13

$7 + 4 = ?$

□ □

 $□ + □ + □$

□ + □ = □

$6 + 5 = ?$

□ □

 $□ + □ + 0$

□ + □ = □

$9 + 6 = ?$

□ □

 $□ + □ + □$

□ + □ = □

$8 + 7 = ?$

□ □

 $□ + □ + □$

□ + □ = □

$7 + 6 = ?$

□ □

 $□ + □ + □$

□ + □ = □

$5 + 9 = ?$

□ □

 $□ + □ + □$

□ + □ = □

$8 + 8 = ?$

□ □

 $□ + □ + □$

□ + □ = □

$7 + 5 = ?$

□ □

 $□ + □ + □$

□ + □ = □

$9 + 7 = ?$

□ □

 $□ + □ + □$

□ + □ = □

$6 + 6 = ?$

□ □

 $□ + □ + □$

□ + □ = □

$7 + 8 = ?$

□ □

 $□ + □ + □$

□ + □ = □

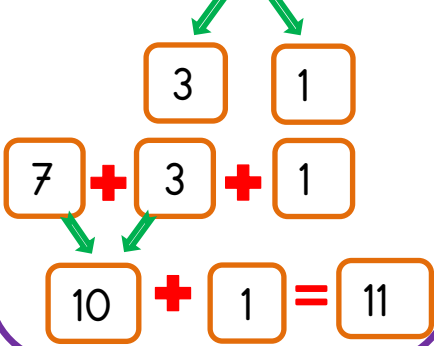


ZİHİNDEN TOPLAMA İŞLEMİ 2

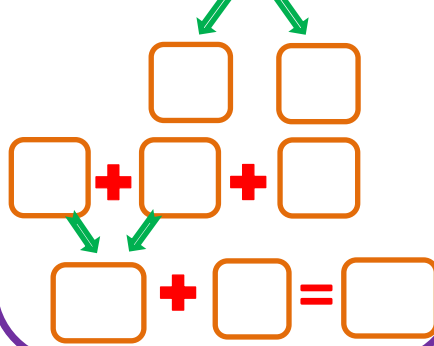


- Aşağıda verilen toplama işlemlerini örnekte kullanılan yöntemle göre zihinden yapınız.

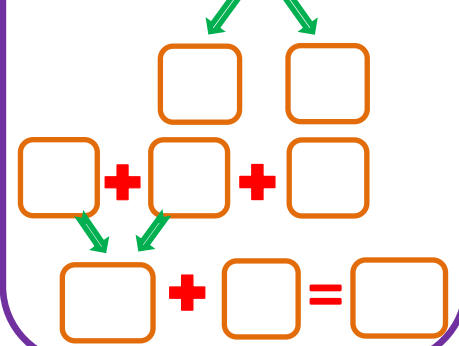
$7 + 4 = ?$



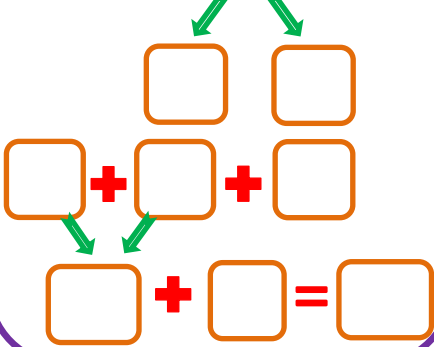
$9 + 3 = ?$



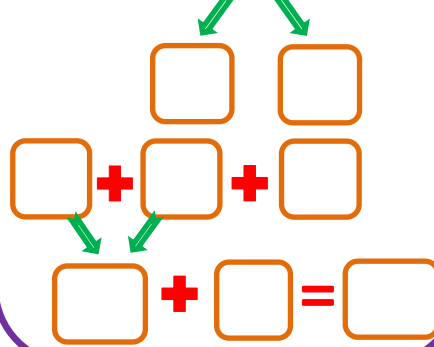
$8 + 4 = ?$



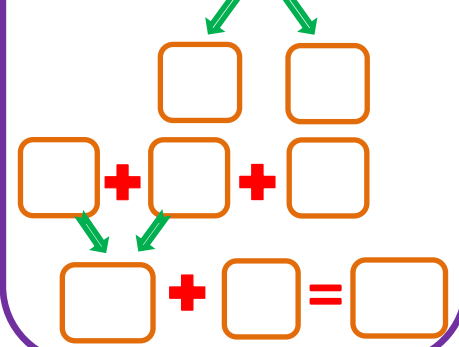
$6 + 8 = ?$



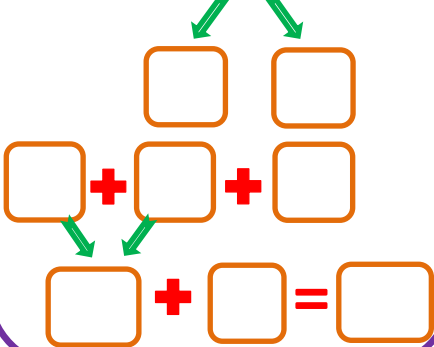
$5 + 7 = ?$



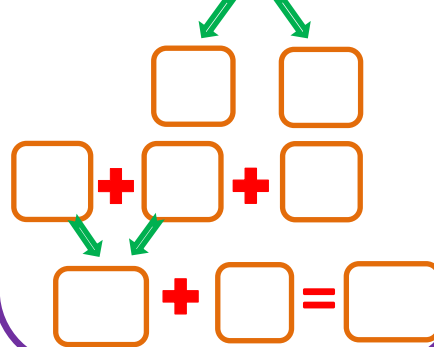
$4 + 9 = ?$



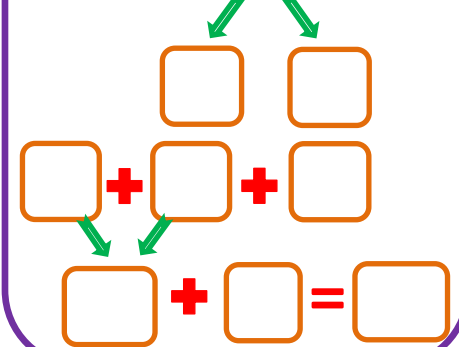
$7 + 9 = ?$



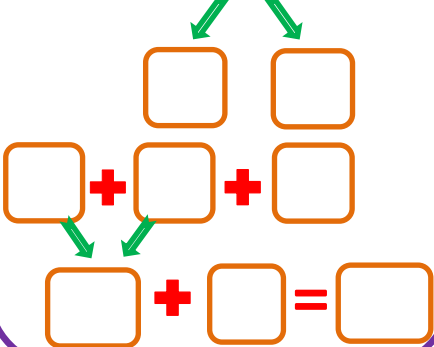
$8 + 6 = ?$



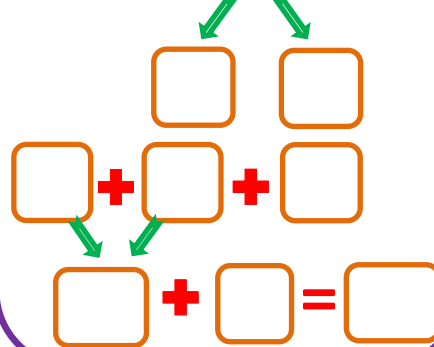
$5 + 9 = ?$



$8 + 3 = ?$



$9 + 6 = ?$



$7 + 8 = ?$

