



Adı Soyadı : .....

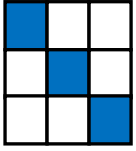

Numarası : .....

Konu: Kesirler (Kesirleri Sayı Doğrusunda Gösterme) Etkinliği 2


Aşağıdaki kesir modellerini kesir sayısı olarak yazarak sayı doğrusunda gösteriniz.




....  
....



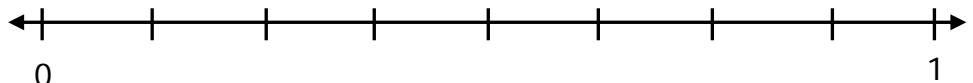
....  
....



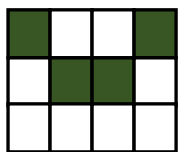
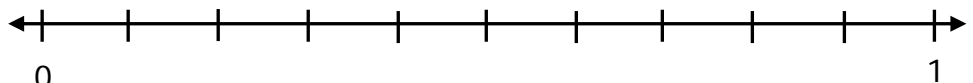
....  
....



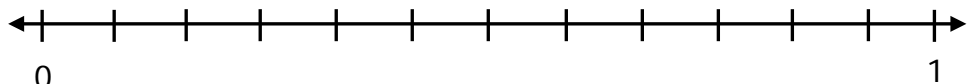
....  
....




....  
....




....  
....




Aşağıdaki sayı doğrusunda harflere karşılık gelen kesirleri ve okunuşlarını yazınız.




A number line from 0 to 1 with 6 equal segments. A red letter 'A' is above the 3rd tick mark. Below the line, a red arrow points to the 3rd tick mark, followed by a fraction  $\frac{\dots}{\dots}$  and the text "Okunuşu: ....."




A number line from 0 to 1 with 6 equal segments. A red letter 'B' is above the 5th tick mark. Below the line, a red arrow points to the 5th tick mark, followed by a fraction  $\frac{\dots}{\dots}$  and the text "Okunuşu: ....."




A number line from 0 to 1 with 10 equal segments. A red letter 'C' is above the 7th tick mark. Below the line, a red arrow points to the 7th tick mark, followed by a fraction  $\frac{\dots}{\dots}$  and the text "Okunuşu: ....."




A number line from 0 to 1 with 6 equal segments. A red letter 'D' is above the 2nd tick mark. Below the line, a red arrow points to the 2nd tick mark, followed by a fraction  $\frac{\dots}{\dots}$  and the text "Okunuşu: ....."



A number line from 0 to 1 with 6 equal segments. A red letter 'E' is above the 5th tick mark. Below the line, a red arrow points to the 5th tick mark, followed by a fraction  $\frac{\dots}{\dots}$  and the text "Okunuşu: ....."




A number line from 0 to 1 with 6 equal segments. A red letter 'F' is above the 5th tick mark. Below the line, a red arrow points to the 5th tick mark, followed by a fraction  $\frac{\dots}{\dots}$  and the text "Okunuşu: ....."




A number line from 0 to 1 with 10 equal segments. A red letter 'G' is above the 1st tick mark. Below the line, a red arrow points to the 1st tick mark, followed by a fraction  $\frac{\dots}{\dots}$  and the text "Okunuşu: ....."

Aşağıda verilen kesirleri sayı doğrusunda gösterelim.


$$\frac{2}{4}$$




$$\frac{4}{5}$$




$$\frac{3}{6}$$




$$\frac{2}{7}$$



$$\frac{6}{8}$$



$$\frac{5}{9}$$



$$\frac{8}{10}$$

