



KESİRLER



Aşağıdaki kesirlerden payı paydasından küçük olanları işaretleyelim.

$$\frac{5}{9}$$

$$\frac{6}{6}$$

$$\frac{8}{7}$$

$$\frac{2}{5}$$

$$\frac{1}{4}$$

$$\frac{3}{8}$$

$$\frac{10}{10}$$

$$\frac{14}{20}$$

$$\frac{30}{50}$$

$$\frac{3}{3}$$

$$\frac{9}{9}$$

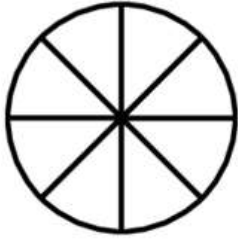
$$\frac{6}{12}$$

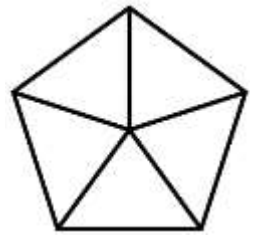
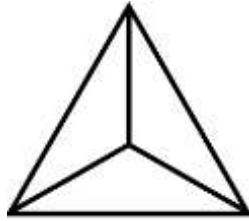

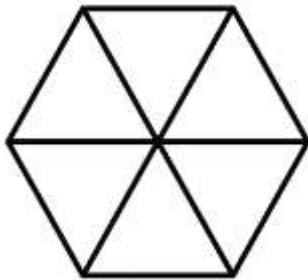
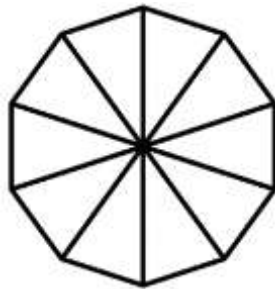
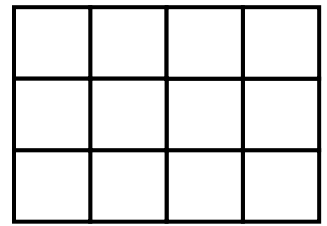
$$\frac{4}{7}$$

$$\frac{53}{75}$$



Aşağıdaki şekillerden payı paydasından küçük olan kesirler elde edelim.


.....

.....

.....

.....

.....

.....

.....

.....