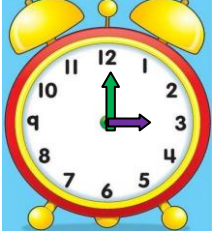


SAATLERİN OKUNUŞU VE GÖSTERİLİŞİ 1

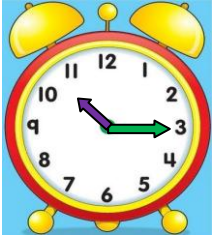
- Aşağıda verilen saatlerin öğleden önce kaç gösterdiklerini okunuşlarını yazınız.



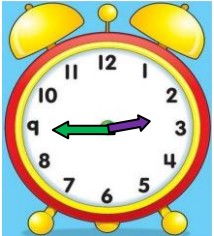
Okunuşu:



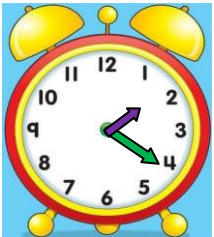
Okunuşu:



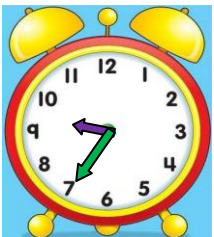
Okunuşu:



Okunuşu:



Okunuşu:

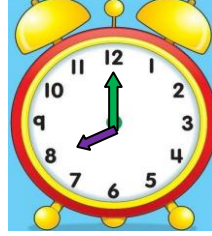


Okunuşu:



Okunuşu:

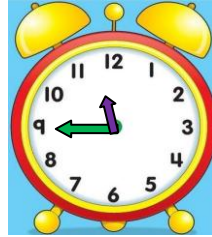
- Aşağıda verilen saatlerin öğleden sonra kaç gösterdiklerini okunuşlarını yazınız.



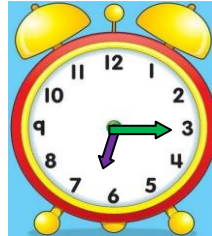
Okunuşu:




Okunuşu:



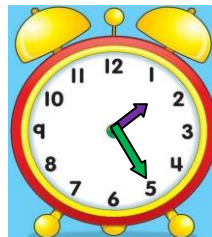
Okunuşu:



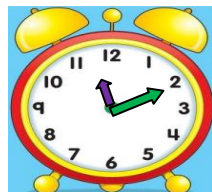
Okunuşu:



Okunuşu:



Okunuşu:



Okunuşu:



SAATLERİN OKUNUŞU VE GÖSTERİLİŞİ 2




- Aşağıda verilen saatleri **akrep** ve **yelkovan** kullanarak saat modelinde çiziniz. Saatlerin okunuşunu yazınız.




03:15

Okunuşu:




10:30

Okunuşu:



07:45

Okunuşu:




14:20

Okunuşu:



17:40

Okunuşu:



21:10

Okunuşu:



06:50


Okunuşu:

- Aşağıda verilen saatleri **akrep** ve **yelkovan** kullanarak saat modelinde çiziniz. Saatlerin okunuşunu yazınız.



11:25

Okunuşu:



13:35

Okunuşu:




15:05

Okunuşu:




04:50

Okunuşu:



09:00

Okunuşu:



23:55

Okunuşu:



00:30

Okunuşu: