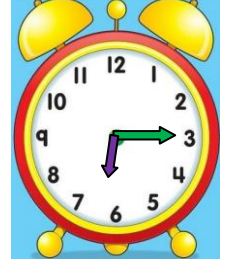
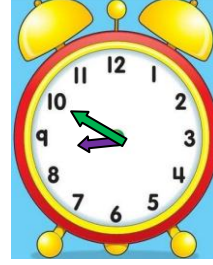
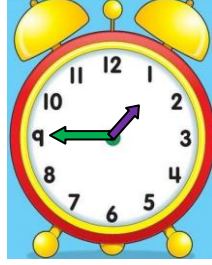
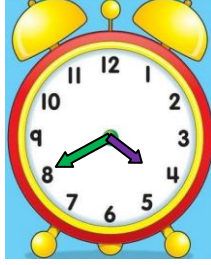



## SAATLERİN OKUNUŞU VE GÖSTERİLİŞİ 3

- Aşağıda okunuşları verilen ifadeleri uygun saat modelleriyle eşleştiriniz.




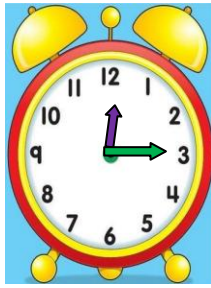

İkiye  
çeyrek var.

Altıyı çeyrek  
geçiyor.

Yediyi yirmi  
geçiyor.

Dokuza on  
var.

On altıyı kırk  
geçiyor.



Sekize  
yirmi var.

Üçe beş  
var.

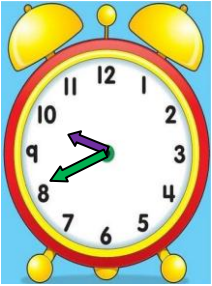
Bire on var.

Yirmi ikiye  
çeyrek var.

On ikiyi çeyrek  
geçiyor.

İskender07

- Aşağıda verilen saatleri öğleden önce ve öğleden sonra olacak şekilde yazınız.



Ö.Ö : .  
Ö.S : .

Ö.Ö : .  
Ö.S : .

Ö.Ö : .  
Ö.S : .

Ö.Ö : .  
Ö.S : .

Ö.Ö : .  
Ö.S : .

## SAATLERİN ÖNCE VE SONRA GÖSTERİLİŞİ 4

- Aşağıda verilen saatlerin önce ve sonra istenilen saatleri çizin

11.20




15 dakika önce




11.05

30 dakika sonra




.

1 saat önce




.

1 saat sonra



.

07.40




20 dakika önce



.

15 dakika sonra




.

1 saat önce




.

1 saat sonra



.

04.50



25 dakika önce




.

30 dakika sonra




.

40 dakika önce



.

40 dakika sonra



.

